

SpellIndia

INDIA'S **1**  
No.

**SPELLING BEE**

Preparatory Study Material  
Provider

[www.phonicstore.com](http://www.phonicstore.com)

**ICSE ACADEMY**  
[www.spellbeeacademy.com](http://www.spellbeeacademy.com)



**Competency Questions**

**PREPARE**

for

**ICSE**

Class 10

**Mathematics**



# ICSE ACADEMY: How to Prepare for ICSE Class 10 exams

<https://www.spellbeeacademy.com/icse.html>



## How to Prepare for ICSE Class 10 exams : Free Resources

Please click on subject to proceed further.

We will keep adding resources here till "March 2026".

So, save this link, keep visiting and stay updated.

( Resources include : Syllabus, Past Year Papers, Specimen Papers, Competency based Questions, Books pdf downloadable, 350+ Term Papers / Prelim Papers of various schools - across subjects, etc. )

- |                          |                       |                          |                       |
|--------------------------|-----------------------|--------------------------|-----------------------|
| 01 English Literature    | 02 English Language   | 03 Geography             | 04 History & Civics   |
| 05 Physics               | 06 Chemistry          | 07 Mathematics           | 08 Biology            |
| 09 Computer Applications | 10 Physical Education | 11 Hindi                 | 12 Commercial Studies |
| 13 Economics             | 14 Technical Drawing  | 15 Environmental Science | 16 Home Science       |
| 17 Gujarati              | 18 Marathi            | 19 French                |                       |



SCAN QR code to buy the book at amazon NOW.

SpellIndia  
INDIA's No. 1 SPELLING BEE  
Preparatory Study Material Provider  
www.spellindia.com

ICSE ACADEMY  
www.spellbeeacademy.com

**Pati's**

**PREPARE**  
for  
**ICSE**  
Classes 9 & 10  
**ENGLISH GRAMMAR**  
(Includes - Board Specimen Papers of 6 years & Competency-focused questions)

**28 YEARS** Past Questions

**75** Practice TESTS

Authoring to board exams 2024-2027 exams

**Debashis Pati**  
Author is the 1st individual to write preparatory books on various topics of 'multiple' Spelling Bee competitions in India. He has written the Maximum Number of Spelling Books as well as Tests in the world.

ing / Vocabulary / Grammar Olympiad Exam conductor.



SpellIndia  
INDIA's No. 1 SPELLING BEE  
Preparatory Study Material Provider  
www.spellindia.com

ICSE ACADEMY  
www.spellbeeacademy.com

**Pati's**

**PREPARE**  
for  
**ICSE**  
Class 10  
(Acts 3 to 5 only)  
**Julius Caesar**

**1000+** Practice QUESTIONS\*

**30** Practice TESTS  
(With answer questions of 10 acts only)

# Past Years' Questions (13 years: 1990 onwards)  
# Competency focused Questions (1 year)  
# Multiple choice Questions (850+ nos\*)  
# Extract based Questions (65+ extracts\*)  
\*Includes the questions of last 13 past years' questions and the 20 tests.

Authoring to board exams 2024-2027 exams

**Debashis Pati**  
Author is the 1st individual to write preparatory books on various topics of 'multiple' Spelling Bee competitions in India. He has written the Maximum Number of Spelling Books as well as Tests in the world.

ing / Vocabulary / Grammar Olympiad Exam conductor.



SpellIndia  
INDIA's No. 1 SPELLING BEE  
Preparatory Study Material Provider  
www.spellindia.com

ICSE ACADEMY  
www.spellbeeacademy.com

**Pati's**

**PREPARE**  
for  
**ICSE**  
Class 10  
**HINDI GRAMMAR**  
# 350+ Sample practice questions & # 51 Tests

**350+** SAMPLE QUESTIONS

**51** TEST PAPERS

Authoring to board exams 2025 / 2026 onwards

**तामसी पति**  
**Tamasee Pati**



SpellIndia  
INDIA's No. 1 SPELLING BEE  
Preparatory Study Material Provider  
www.spellindia.com

ICSE ACADEMY  
www.spellbeeacademy.com

**Pati's**

**PREPARE**  
for  
**ICSE**  
Class 10  
**CIVICS**  
The TESTS are based on the Prelim / Pre-board papers of various schools. Answers are provided for all.  
Competency Based Questions and 3 Specimen Papers are provided.

**40** TEST PAPERS



Authoring to board exams 2024 / 2025 EXAM

**Debashis Pati**  
Author of ICSE Test Paper series.

is the Maximum Number books as well as Tests in the world.




# Scan QR code for Free Access to 500+ Prelim Papers across 20 subjects



# Prepare for ICSE CLASS 10 Mathematics

Free Resources

**SCAN QR CODE Now**



## COMPETENCY-FOCUSED PRACTICE QUESTIONS

### Table of Contents

	<i>Pg. No</i>
<i>Questions</i>	
I. Multiple-Choice Questions Type	1
II. Short Answer Type-1	14
III. Short Answer Type-2	21
IV. Long Answer Type-1 (Graph-based)	29
V. Long Answer Type-2	31
<i>Answer Key</i>	36

Note : This is a CISCE document, a MUST DO for every student.

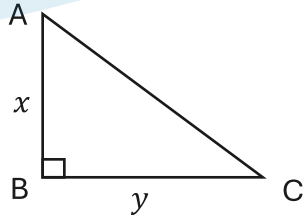
FOR ICSE – CLASS X

## Mathematics

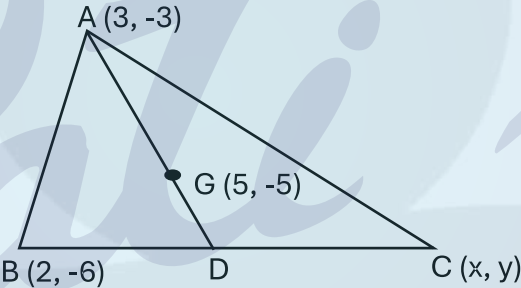
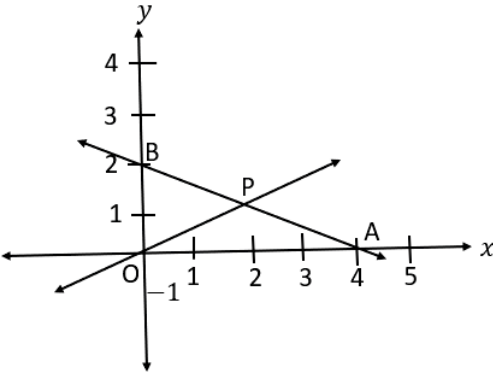
### I: Multiple Choice Questions Type (1 Mark Each)

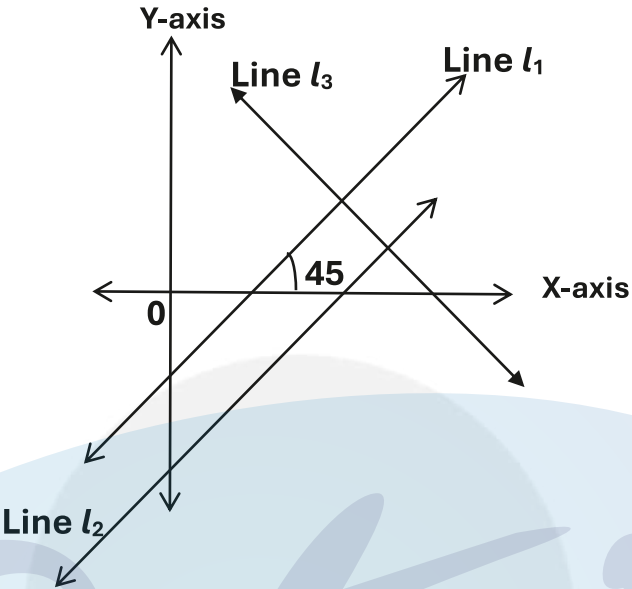
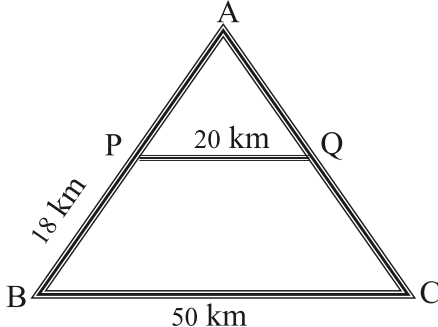
S.No.	Questions
1.	<p><i>[Commercial Mathematics]</i></p> <p>A retailer buys an article at its listed price from a wholesaler and sells it to a consumer in the same state after marking up the price by 20%. The list price of the article is ₹ 2500, and the rate of GST is 12%. What is the tax liability of the retailer to the central government?</p> <p>(a) ₹0 (b) ₹15 (c) ₹30 (d) ₹60</p> <p style="text-align: right;"><b>[Analysis &amp; Evaluate]</b></p>
2.	<p><i>[Commercial Mathematics]</i></p> <p>Dev bought an electrical fan which has a marked price of ₹800. If the GST on the goods is 7%, then the SGST is:</p> <p>(a) ₹ 24 (b) ₹ 28 (c) ₹ 56 (d) ₹ 80</p> <p style="text-align: right;"><b>[Evaluate]</b></p>
3.	<p><i>[Commercial Mathematics]</i></p> <p>₹ P is deposited for <math>n</math> number of months in a recurring deposit account which pays interest at the rate of <math>r</math> % per annum. The nature and time of interest calculated is:</p> <p>(a) compound interest for <math>n</math> number of months. (b) simple interest for <math>n</math> number of months. (c) compound interest for one month. (d) simple interest for one month</p> <p style="text-align: right;"><b>[Understanding &amp; Application]</b></p>

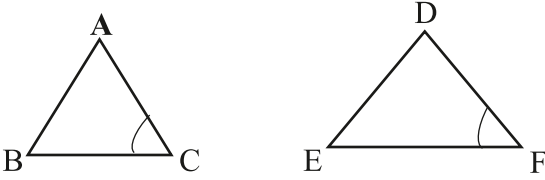
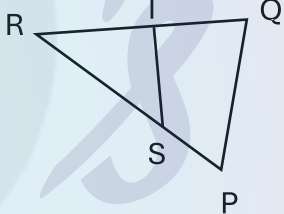
S.No.	Questions
4.	<p><i>[Commercial Mathematics]</i></p> <p>Anwasha intended to open a Recurring Deposit account of ₹1000 per month for 1 year in a Bank, paying a 5% per annum rate of simple interest. The bank reduced the rate to 4% per annum. How much must Anwasha deposit monthly for 1 year so that her interest remains the same?</p> <p>(a) ₹12325 (b) ₹1250 (c) ₹1200 (d) ₹1000</p> <p style="text-align: right;"><b>[Analysis &amp; Evaluate]</b></p>
5.	<p><i>[Commercial Mathematics]</i></p> <p>Mr. Das invests in ₹100, 12% shares of Company A available at ₹60 each. Mr. Singh invests in ₹50, 16 % shares of Company B available at ₹40 each. Use this information to state which of the following statements is true.</p> <p>(a) The rate of return for Mr. Das is 12% (b) The rate of return for Mr. Singh is 10% (c) Both Mr. Das and Mr. Singh have the same rate of return of 10% (d) Both Mr. Das and Mr. Singh have the same rate of return of 20%</p> <p style="text-align: right;"><b>[Application &amp; Evaluate]</b></p>
6.	<p><i>[Commercial Mathematics]</i></p> <p>Amit invested a certain sum of money in ₹100 shares, paying a 7.5% dividend. The rate of return on his investment is 10%. The money invested by Amit to purchase 10 shares is:</p> <p>(a) ₹ 250 (b) ₹ 750 (c) ₹ 900 (d) ₹ 1100</p> <p style="text-align: right;"><b>[Application &amp; Evaluate]</b></p>
7.	<p><i>[Algebra]</i></p> <p>If <math>-3 \leq -4x+5</math> and <math>x \in W</math>, then the solution set is.</p> <p>(a) <math>\{ \dots -3, -2, -1, 0, 1, 2, 3 \dots \}</math> (b) <math>\{ 1, 2 \}</math> (c) <math>\{ 0, 1, 2 \}</math> (d) <math>\{ 2, 3, 4, 5 \}</math></p> <p style="text-align: right;"><b>[Understanding &amp; Application]</b></p>
8.	<p><i>[Algebra]</i></p> <p>If <math>-4x &gt; 8y</math>, then</p> <p>(a) <math>x &gt; 2y</math> (b) <math>x &gt; -2y</math> (c) <math>x &lt; -2y</math> (d) <math>x &lt; 2y</math></p> <p style="text-align: right;"><b>[Understanding &amp; Application]</b></p>

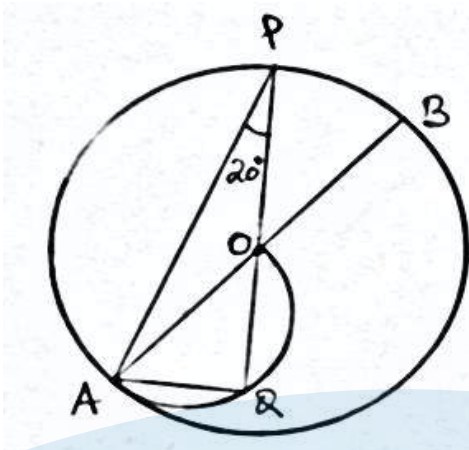
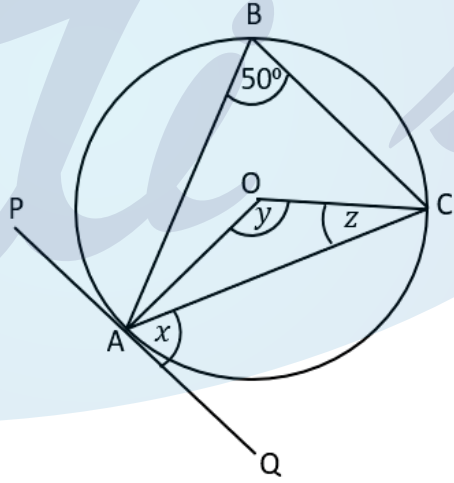
S.No.	Questions
9.	<p><i>[Algebra]</i></p> <p>The value/s of 'k' for which the quadratic equation <math>2x^2 - kx + k = 0</math> has equal roots is(are):</p> <p>(a) 0 only            (b) 4,0            (c) 8 only            (d) 0,8</p> <p style="text-align: right;"><b>[Understanding &amp; Application]</b></p>
10.	<p><i>[Algebra]</i></p> <p>If <math>x = -2</math> is one of the solutions of the quadratic equation <math>x^2 + 3a - x = 0</math>, then the value of 'a' is</p> <p>(a) -8            (b) -2            (c) -1/3            (d) 1/3</p> <p style="text-align: right;"><b>[Understanding &amp; Application]</b></p>
11.	<p><i>[Algebra]</i></p> <p>In solving a quadratic equation, one of the values of the variable <math>x</math> is 233.356. The solution rounded to two significant figures is:</p> <p>(a) 233.36            (b) 233.35            (c) 233.3            (d) 230</p> <p style="text-align: right;"><b>[Understanding &amp; Application]</b></p>
12.	<p><i>[Algebra]</i></p> <p>In the adjoining diagram, <math>AB = x</math> cm, <math>BC = y</math> cm and <math>x - y = 7</math> cm. Area of <math>\triangle ABC = 30 \text{ cm}^2</math>. The length of AC is:</p> <p>(a) 10 cm            (b) 12 cm            (c) 13 cm            (d) 15 cm</p> <div style="text-align: right;">  </div> <p style="text-align: right;"><b>[Analysis &amp; Evaluate]</b></p>
13.	<p><i>[Algebra]</i></p> <p>If <math>p</math>, <math>q</math>, and <math>r</math> are in continued proportion, then:</p> <p>(a) <math>p : q = p : r</math>            (b) <math>q : r = p^2 : q^2</math>            (c) <math>p : q^2 = r : p^2</math>            (d) <math>p : r = p^2 : q^2</math></p> <p style="text-align: right;"><b>[Understanding &amp; Application]</b></p>

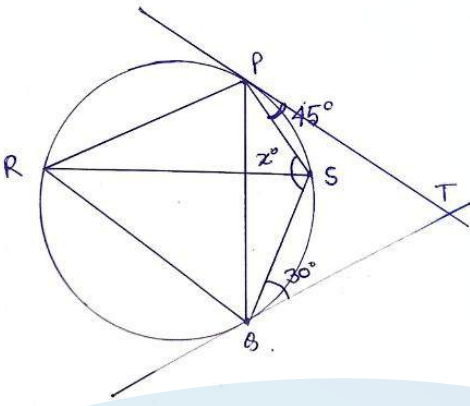
S.No.	Questions
14.	<p><i>[Mensuration]</i></p> <p>The ratio of diameter to height of a Borosil cylindrical glass is 3:5. If the actual diameter of the glass is 6cm, then the curved surface area of the glass is (in <math>\text{cm}^2</math>):</p> <p>(a) <math>120\pi</math>            (b) <math>60\pi</math>            (c) <math>30\pi</math>            (d) <math>18\pi</math></p> <p style="text-align: right;"><b>[Analysis &amp; Evaluate]</b></p>
15.	<p><i>[Algebra]</i></p> <p>If the polynomial <math>2x^3 + 3x^2 - 2x - 3</math> is completely divisible by <math>(2x + a)</math>, and the quotient is equal to <math>(x^2 - 1)</math>, then one of the values of <math>a</math> is:</p> <p>(a) -3            (b) -1            (c) 1            (d) 3</p> <p style="text-align: right;"><b>[Analysis]</b></p>
16.	<p><i>[Algebra]</i></p> <p>A polynomial in <math>x</math> is <math>x^3 + 5x^2 - kx - 24</math>. Which of the following is a factor of the given polynomial so that the value of <math>k</math> is 2?</p> <p>(a) <math>(x + 2)</math>            (b) <math>(x - 3)</math>            (c) <math>(x + 4)</math>            (d) <math>(x - 4)</math></p> <p style="text-align: right;"><b>[Analysis &amp; Evaluate]</b></p>
17.	<p><i>[Algebra]</i></p> <p>If <math>A = \begin{bmatrix} a &amp; b \end{bmatrix}</math> and <math>B = \begin{bmatrix} c \\ d \end{bmatrix}</math>, then</p> <p>(a) only matrix <math>AB</math> is possible.            (b) only matrix <math>BA</math> is possible.            (c) both matrices <math>AB</math> and <math>BA</math> are possible.            (d) both matrices <math>AB</math> and <math>BA</math> are possible, <math>AB = BA</math>.</p> <p style="text-align: right;"><b>[Understanding &amp; Application]</b></p>
18.	<p><i>[Algebra]</i></p> <p>Matrix <math>A = \begin{bmatrix} 6 &amp; 9 \\ -4 &amp; k \end{bmatrix}</math> such that <math>A^2 = \begin{bmatrix} 0 &amp; 0 \\ 0 &amp; 0 \end{bmatrix}</math>. Then <math>k</math> is:</p> <p>(a) 6            (b) -6            (c) 36            (d) <math>\pm 6</math></p> <p style="text-align: right;"><b>[Analysis &amp; Evaluate]</b></p>

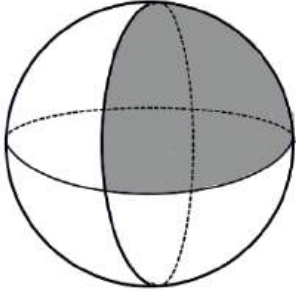
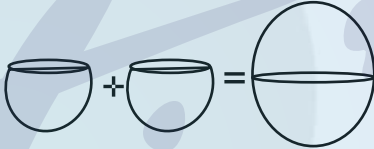
S.No.	Questions
19.	<p><i>[Algebra]</i></p> <p>If the sum of <math>n</math> terms of an arithmetic progression <math>S_n = n^2 - n</math>, then the third term of the series is:</p> <p>(a) 2 (b) 4 (c) 6 (d) 9</p> <p style="text-align: right;"><b>[Understanding &amp; Application]</b></p>
20.	<p><i>[Algebra]</i></p> <p>Which of the following is not a geometric progression?</p> <p>(a) <math>1/3, 1, 3, 9</math> (b) <math>1/5, 1/5, 1/5, 1/5</math> (c) <math>-2, 4, -8, 16</math> (d) <math>2, 0, 4, 0, 8, 0</math></p> <p style="text-align: right;"><b>[Understanding]</b></p>
21.	<p><i>[Algebra]</i></p> <p>In the adjoining diagram, <math>G</math> is the centroid of <math>\triangle ABC</math>. <math>A(3, -3)</math>, <math>B(2, -6)</math>, <math>C(x, y)</math> and <math>G(5, -5)</math>. The coordinates of point <math>D</math> are:</p> <p>(a) <math>(2, -6)</math> (b) <math>(3, -6)</math> (c) <math>(6, -6)</math> (d) <math>(10, -6)</math></p> <div style="text-align: center;">  </div> <p style="text-align: right;"><b>[Analysis &amp; Application]</b></p>
22.	<p><i>[Algebra]</i></p> <p>In the given diagram, <math>O</math> is the origin, and <math>P</math> is the midpoint of <math>AB</math>. The equation of <math>OP</math> is:</p> <p>(a) <math>y = x</math> (b) <math>2y = x</math> (c) <math>y = 2x</math> (d) <math>y = -x</math></p> <div style="text-align: center;">  </div> <p style="text-align: right;"><b>[Analysis &amp; Application]</b></p>

S.No.	Questions
<p>23.</p>	<p><i>[Algebra]</i></p> <p>In the given figure Line <math>l_1</math> is a parallel to Line <math>l_2</math>. If line <math>l_3</math> is perpendicular to Line <math>l_1</math>, then the slopes of lines <math>l_2</math> and <math>l_3</math> respectively are:</p> <p>(a) 1, 1            (b) -1, -1            (c) 1, -1            (d) -1, 1</p>  <p style="text-align: right;"><b>[Analysis &amp; Application]</b></p>
<p>24.</p>	<p><i>[Algebra]</i></p> <p>Which of the following lines cut the positive <math>x</math>-axis and positive <math>y</math>-axis at equal distances from the origin?</p> <p>(a) <math>3x+3y=6</math>            (b) <math>5x+10y=10</math>            (c) <math>-x+y=1</math>            (d) <math>10x+5y=5</math></p> <p style="text-align: right;"><b>[Understanding &amp; Application]</b></p>
<p>25.</p>	<p><i>[Geometry]</i></p> <p>In the given diagram (not drawn to scale), railway stations A, B, C, P and Q are connected by straight tracks. Track PQ is parallel to BC. The time taken by a train travelling at 90km/hr to reach B from A by the shortest route is:</p> <p>(a) 8 minutes            (b) 12 minutes            (c) 16.8 minutes            (d) 20 minutes</p>  <p style="text-align: right;"><b>[Analysis &amp; Application]</b></p>


S.No.	Questions
26.	<p data-bbox="323 286 475 320"><i>[Geometry]</i></p> <div style="text-align: center;">  </div> <p data-bbox="323 656 1281 689">In the given diagram, <math>\triangle ABC</math> and <math>\triangle DEF</math> (not drawn to scale) are such that <math>\angle C = \angle F</math> and <math>\frac{AB}{DE} = \frac{BC}{EF}</math>, then</p> <p data-bbox="323 779 1069 925">           (a) <math>\triangle ABC \sim \triangle DEF</math>            (b) <math>\triangle BCA \sim \triangle DEF</math>            (c) <math>\triangle CAB \sim \triangle DEF</math>            (d) the similarity of given triangles cannot be determined.         </p> <p data-bbox="1241 891 1377 925" style="text-align: right;"><b>[Analysis]</b></p>
27.	<p data-bbox="323 958 475 992"><i>[Geometry]</i></p> <p data-bbox="323 1014 970 1126">In the adjoining diagram, <math>ST</math> is not parallel to <math>PQ</math>. The necessary and sufficient conditions for <math>\triangle PQR \sim \triangle TSR</math> is:</p> <div style="text-align: right;">  </div> <p data-bbox="323 1149 558 1283">           (a) <math>\angle PQR = \angle STR</math>            (b) <math>\angle QPR = \angle TSR</math>            (c) <math>\angle PQR = \angle TSR</math>            (d) <math>\angle PRQ = \angle RST</math> </p> <p data-bbox="962 1261 1385 1294" style="text-align: right;"><b>[Understanding &amp; Application]</b></p>
28.	<p data-bbox="323 1323 475 1357"><i>[Geometry]</i></p> <p data-bbox="323 1379 1361 1447">The scale factor of a picture and the actual height of Sonia is 20cm: 1.6m. If her height in the picture is 18cm, then her actual height is,</p> <p data-bbox="323 1469 459 1603">           (a) 14.4m            (b) 2.25m            (c) 1.78m            (d) 1.44m         </p> <p data-bbox="1042 1581 1385 1615" style="text-align: right;"><b>[Analysis &amp; Application]</b></p>

S.No.	Questions
<p>29.</p>	<p><i>[Geometry]</i></p> <p>In the adjoining figure, O is the centre of the circle, and a semicircle is drawn on OA as the diameter. <math>\angle APQ=20^\circ</math>. The degree measure of <math>\angle OAQ</math> is:</p> <p>(a) <math>25^\circ</math>            (b) <math>40^\circ</math>            (c) <math>50^\circ</math>            (d) <math>65^\circ</math></p>  <p style="text-align: right;"><b>[Analysis &amp; Application]</b></p>
<p>30.</p>	<p><i>[Geometry]</i></p> <p>In the given diagram, O is the centre of the circle, and PQ is a tangent at A. If <math>\angle ABC=50^\circ</math>, then values of <math>x, y</math> and <math>z</math> respectively are:</p> <p>(a) <math>50^\circ, 100^\circ, 40^\circ</math>            (b) <math>50^\circ, 50^\circ, 65^\circ</math>            (c) <math>40^\circ, 80^\circ, 50^\circ</math>            (d) <math>50^\circ, 25^\circ, 78^\circ</math></p>  <p style="text-align: right;"><b>[Analysis &amp; Evaluation]</b></p>

S.No.	Questions
<p>31.</p>	<p><i>[Geometry]</i></p> <p>In the given figure PT and QT are tangents to a circle such that <math>\angle TPS = 45^\circ</math> and <math>\angle TQS = 30^\circ</math>. Then the value of <math>x</math> is:</p> <p>(a) <math>30^\circ</math>            (b) <math>45^\circ</math>            (c) <math>75^\circ</math>            (d) <math>105^\circ</math></p>  <p style="text-align: right;"><i>[Analysis &amp; Evaluation]</i></p>
<p>32.</p>	<p><i>[Mensuration]</i></p> <p>A cylindrical metallic wire is stretched to double its length. Which of the following will NOT change for the wire after stretching?</p> <p>(a) Its curved surface area.            (b) Its total surface area.            (c) Its volume.            (d) Its radius.</p> <p style="text-align: right;"><i>[Understanding]</i></p>
<p>33.</p>	<p><i>[Mensuration]</i></p> <p>A right circular cone has the radius of the base equal to the height of the cone. If the volume of the cone is 9702 cu cm, then the diameter of the base of the cone is:</p> <p>(a) 21cm            (b) 42cm            (c) <math>21\sqrt{7}</math> cm            (d) <math>2\sqrt{7}</math> cm.</p> <p><i>[Use <math>\pi = 22/7</math>]</i></p> <p style="text-align: right;"><i>[Understanding &amp; Application]</i></p>

S.No.	Questions
<p>34.</p>	<p><i>[Mensuration]</i></p> <p>A solid sphere with a radius of 4cm is cut into 4 identical pieces by two mutually perpendicular planes passing through its centre. Find the total surface area of one-quarter piece.</p> <p>(a) <math>24\pi</math> (b) <math>32\pi</math> (c) <math>48\pi</math> (d) <math>64\pi</math></p>  <p style="text-align: right;"><b>[Understanding &amp; Application]</b></p>
<p>35.</p>	<p><i>[Mensuration]</i></p> <p>Two identical solid hemispheres are kept in contact to form a sphere. The ratio of the total surface areas of the two hemispheres to the surface area of the sphere formed is:</p> <p>(a) 1 : 1 (b) 3 : 2 (c) 2 : 3 (d) 2 : 1</p>  <p style="text-align: right;"><b>[Analysis &amp; Application]</b></p>
<p>36.</p>	<p><i>[Trigonometry]</i></p> <p><math>\operatorname{cosec}^2\theta + \sec^2\theta</math> is equal to:</p> <p>(a) <math>\tan^2\theta + \cot^2\theta</math> (b) <math>\cot\theta + \tan\theta</math> (c) <math>(\cot\theta + \tan\theta)^2</math> (d) 1</p> <p style="text-align: right;"><b>[Application]</b></p>
<p>37.</p>	<p><i>[Trigonometry]</i></p> <p>Given <math>a = 3 \sec^2\theta</math> and <math>b = 3 \tan^2\theta - 2</math>. The value of <math>(a - b)</math> is:</p> <p>(a) 1 (b) 2 (c) 3 (d) 5</p> <p style="text-align: right;"><b>[Application]</b></p>

S.No.	Questions												
38.	<p><i>[Trigonometry]</i></p> <p>At a certain time of day, the ratio of the height of the pole to the length of its shadow is <math>1 : \sqrt{3}</math>, then the angle of elevation of the sun at that time of the day is:</p> <p>(a) <math>30^\circ</math>            (b) <math>45^\circ</math>            (c) <math>60^\circ</math>            (d) <math>90^\circ</math></p> <p style="text-align: right;"><b>[Understanding &amp; Application]</b></p>												
39.	<p><i>[Trigonometry]</i></p> <p>A man standing on a ship approaching the port towards the lighthouse is observing the top of the lighthouse. In 10 minutes, the angle of elevation of the top of the lighthouse changes from <math>\alpha</math> to <math>\beta</math>. Then:</p> <p>(a) <math>\alpha &gt; \beta</math>            (b) <math>\alpha &lt; \beta</math>            (c) <math>\alpha = \beta</math>            (d) <math>\alpha \leq \beta</math></p> <p style="text-align: right;"><b>[Analysis &amp; Evaluation]</b></p>												
40.	<p><i>[Statistics]</i></p> <p><b>Assertion (A):</b> The difference in class marks of the modal class and the median class of the following frequency distribution table is 0.</p> <table border="1" data-bbox="323 1104 1334 1220"> <thead> <tr> <th>Class interval</th> <th>20 – 30</th> <th>30 – 40</th> <th>40 – 50</th> <th>50 – 60</th> <th>60 -70</th> </tr> </thead> <tbody> <tr> <th>Frequency</th> <td>1</td> <td>3</td> <td>2</td> <td>6</td> <td>4</td> </tr> </tbody> </table> <p><b>Reason (R):</b> Modal class and median class are always the same for a given frequency distribution.</p> <p>(a) Both A and R are correct, and R is the correct explanation for A.            (b) Both A and R are correct, and R is not the correct explanation for A.            (c) A is true, but R is false.            (d) Both A and R are true.</p> <p style="text-align: right;"><b>[Analysis]</b></p>	Class interval	20 – 30	30 – 40	40 – 50	50 – 60	60 -70	Frequency	1	3	2	6	4
Class interval	20 – 30	30 – 40	40 – 50	50 – 60	60 -70								
Frequency	1	3	2	6	4								
41.	<p><i>[Statistics]</i></p> <p><b>Assertion(A):</b> For a collection of 11 arrayed data, the median is the middle number.</p> <p><b>Reason (R):</b> For the data 5, 9,7, 13,10,11,10, the median is 13.</p> <p>(a) Both A and R are correct, and R is the correct explanation for A.            (b) Both A and R are correct, and R is not the correct explanation for A.            (c) A is true, but R is false.            (d) Both A and R are true.</p> <p style="text-align: right;"><b>[Analysis]</b></p>												

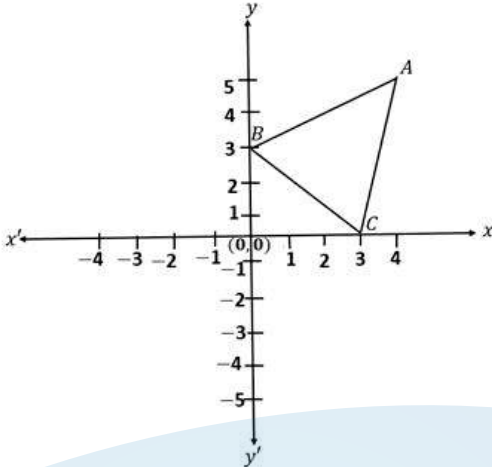
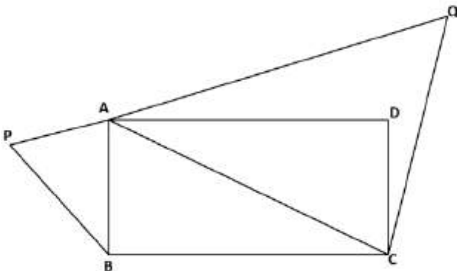
S.No.	Questions
42.	<p><i>[Commercial Mathematics]</i></p> <p>Ankit had the option of investing in company A, where 7%, ₹ 100 shares are available at ₹ 120 or in company B, where 8%, ₹ 1000 shares are available at ₹ 1620.</p> <p><b>Assertion (A):</b> Investment in Company A is better than Company B.</p> <p><b>Reason (R):</b> The rate of income in Company A is better than in Company B.</p> <p>(a) Both A and R are true, and R is the correct explanation.            (b) Both A and R are true, but R is not the correct explanation.            (c) A is false, but R is true.            (d) Both A &amp; R are false.</p> <p style="text-align: right;"><b>[Analysis]</b></p>
43.	<p><i>[Algebra]</i></p> <p><b>Assertion (A):</b> <math>x^3 + 2x^2 - x - 2</math> is a polynomial of degree 3.</p> <p><b>Reason (R):</b> <math>x + 2</math> is a factor of the polynomial.</p> <p>(a) Both A and R are correct, and R is the correct explanation for A.            (b) Both A and R are incorrect.            (c) A is true, but R is false.            (d) Both A and R both are true.</p> <p style="text-align: right;"><b>[Analysis]</b></p>
44.	<p><i>[Algebra]</i></p> <p><b>Assertion(A):</b> The point <math>(-2, 8)</math> is invariant under reflection in line <math>x = -2</math></p> <p><b>Reason (R):</b> If a point has its <math>x</math>-coordinate 0, it is invariant under reflection in both axes.</p> <p>(a) Both A and R are correct, and R is the correct explanation for A.            (b) Both A and R are correct, and R is not the correct explanation for A.            (c) A is true, but R is false.            (d) Both A and R are true.</p> <p style="text-align: right;"><b>[Analysis]</b></p>
45.	<p><i>[Probability]</i></p> <div style="text-align: center;">  </div> <p>When a die is cast with numbering on its faces, as shown, the ratio of the probability of getting a composite number to the probability of getting a prime number is _____.</p> <p>(a) 2:3            (b) 3:2            (c) 1:3            (d) 1:2</p> <p style="text-align: right;"><b>[Analysis]</b></p>

S.No.	Questions
46.	<p><i>[Algebra]</i></p> <p>The product of <math>A = \begin{bmatrix} 1 &amp; -2 \\ -3 &amp; 4 \end{bmatrix}</math> and matrix M is <math>AM = B</math> where <math>B = \begin{bmatrix} 2 \\ 24 \end{bmatrix}</math>, then the order of matrix M is _____.</p> <p>(a) 2x2 (b) 2x1 (c) 1x2 (d) 4x1</p> <p style="text-align: right;"><b>[Understanding &amp; Application]</b></p>
47.	<p><i>[Algebra]</i></p> <p>Given, <math>a_1, a_2, a_3, \dots</math> and <math>b_1, b_2, b_3, \dots</math> are real numbers such that <math>a_1 - b_1 = a_2 - b_2 = a_3 - b_3 = \dots</math> are all equal.</p> <p><math>a_1 - b_1, a_2 - b_2, a_3 - b_3, \dots</math> forms a _____ progression.</p> <p>(a) Geometric (<math>r=1</math>) (b) Arithmetic (<math>d=1</math>) (c) Geometric (<math>r&lt;1</math>) (d) Arithmetic (<math>d=0</math>)</p> <p style="text-align: right;"><b>[Analysis &amp; Application]</b></p>
48.	<p><i>[Geometry]</i></p> <p>Locus of a moving point is _____ if it moves such that it keeps a fixed distance from a fixed point.</p> <p>(a) Circle (b) Line (c) Angle (d) Line segment</p> <p style="text-align: right;"><b>[Recall &amp; Understanding]</b></p>
49.	<p><i>[Geometry]</i></p> <p>The point of concurrence of the angle bisectors of a triangle is called the _____ of the triangle.</p> <p>(a) centroid (b) incentre (c) circumcentre (d) orthocentre</p> <p style="text-align: right;"><b>[Recall &amp; Understanding]</b></p>

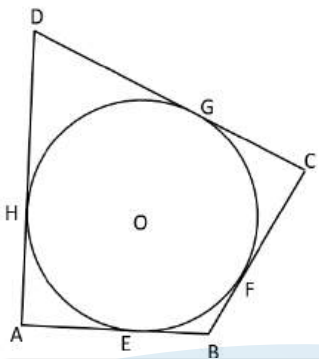
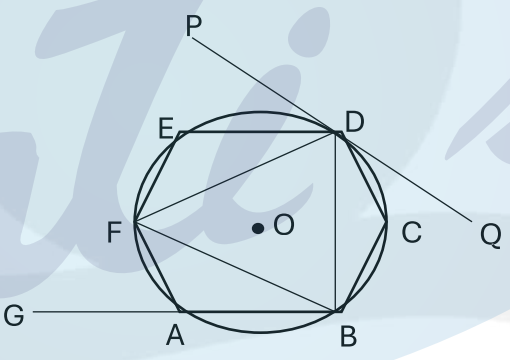
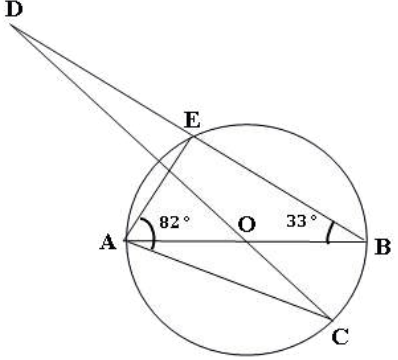
## II. Short Answer Type-1 (3 Marks)

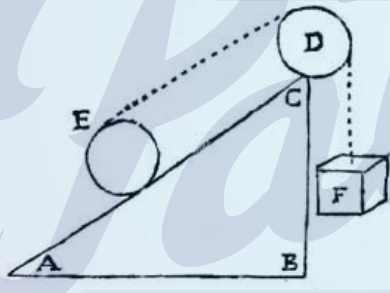
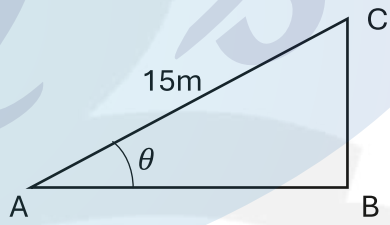
S.No.	Questions
50.	<p><i>[Commercial Mathematics]</i></p> <p>A shopkeeper marked a pressure cooker at Rs 1800. The rate of GST on pressure cooker is 12% . The customer has only Rs. 1792 with him and he requests the shopkeeper to reduce the price so that he can buy the cooker in Rs. 1792. What percent discount must the shopkeeper give? <span style="float: right;"><b>[Application &amp; Evaluation]</b></span></p>
51.	<p><i>[Commercial Mathematics]</i></p> <p>A man opened a recurring deposit account in a branch of PNB. The man deposits certain amount of money per month such that after 2 years , the interest accumulated is equal to his monthly deposits. Find the rate of interest per annum that the bank was paying for the recurring deposit account. <span style="float: right;"><b>[Application &amp; Evaluation]</b></span></p>
52.	<p><i>[Commercial Mathematics]</i></p> <p>Akshay buys 350 shares of ₹50 par value of a company. The dividend declared by the company is 14%. If his return percent from the shares is 10%, find the market value of each share. <span style="float: right;"><b>[Application &amp; Evaluation]</b></span></p>
53.	<p><i>[Algebra]</i></p> <p>Solve the following inequation:</p> $\frac{1}{2}(2x - 1) \leq 2x + \frac{1}{2} \leq 5\frac{1}{2} + x$ <p>(a) Write the maximum and minimum values of <math>x</math> for <math>x \in \mathbb{R}</math>.            (b) What will be the change in maximum and minimum values of <math>x</math> if <math>x \in \mathbb{W}</math>. <span style="float: right;"><b>[Evaluate &amp; Analysis]</b></span></p>
54.	<p><i>[Algebra]</i></p> <p>Solve for <math>x</math>, if <math>\frac{5}{x} + 4\sqrt{3} = \frac{2\sqrt{3}}{x^2}</math>, <math>x \neq 0</math> <span style="float: right;"><b>[Application &amp; Evaluate]</b></span></p>
55.	<p><i>[Algebra]</i></p> <p>The marked price of a toy is same as the percentage of GST that is charged. The price of the toy is ₹ 24 including GST. Taking the marked price as <math>x</math>, form an equation and solve it to find <math>x</math>. <span style="float: right;"><b>[Application &amp; Evaluate]</b></span></p>
56.	<p><i>[Algebra]</i></p> <p>The mean proportion between two numbers is 6 and their third proportional is 48. Find the two numbers. <span style="float: right;"><b>[Application &amp; Evaluate]</b></span></p>

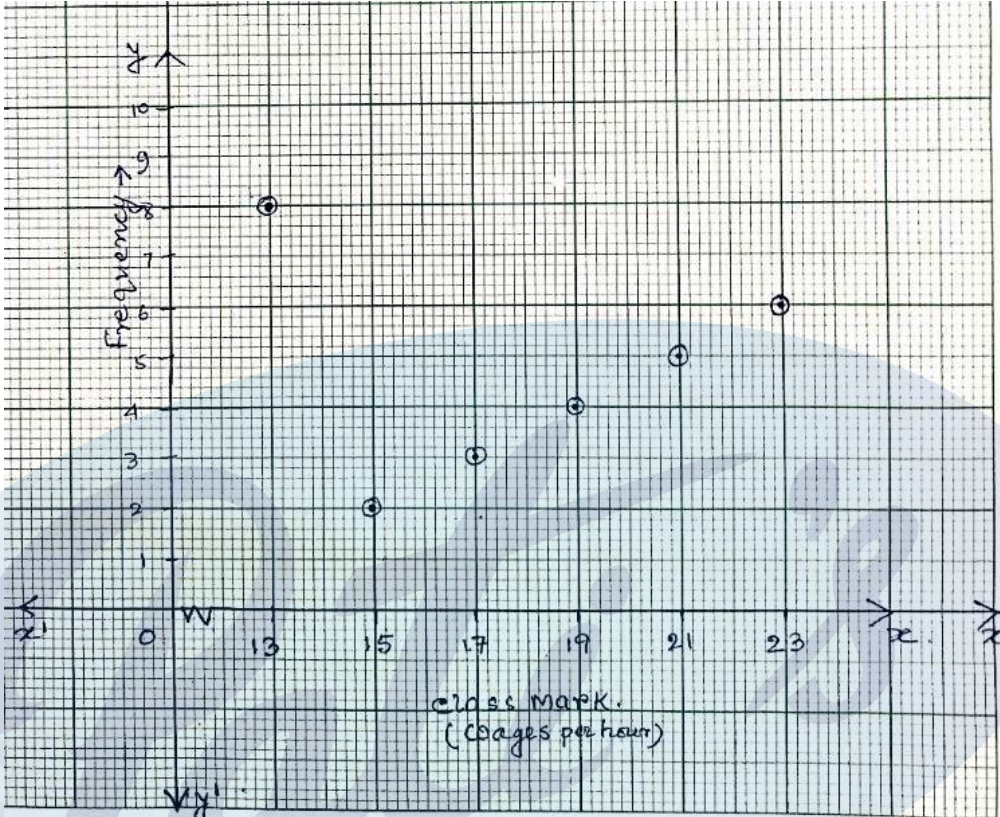
S.No.	Questions
57.	<p><i>[Algebra]</i></p> <p>Pamela factorized the following polynomial:</p> $2x^3 + 3x^2 - 3x - 2$ <p>She found the result as <math>(x+2)(x-1)(x-2)</math>. Using remainder and factor theorem, verify whether her result is correct. If incorrect, give the correct result.</p> <p style="text-align: right;"><b>[Analysis &amp; Application]</b></p>
58.	<p><i>[Algebra]</i></p> <p><math>A = \begin{bmatrix} -6 &amp; 0 \\ 4 &amp; 2 \end{bmatrix}</math> and <math>B = \begin{bmatrix} 1 &amp; 0 \\ 1 &amp; 3 \end{bmatrix}</math>.</p> <p>Find matrix M, if <math>M = \frac{1}{2}A - 2B + 5I</math>, where <math>I</math> is the identity matrix.</p> <p style="text-align: right;"><b>[Application &amp; Evaluate]</b></p>
59.	<p><i>[Algebra]</i></p> <p>(a) Write the <math>n</math>th term (<math>T_n</math>) of an Arithmetic Progression (A.P.) consisting of all whole numbers which are divisible by 3 and 7.</p> <p>(b) How many of these are two-digit numbers? Write them.</p> <p>(c) Find the sum of first 10 terms of this A.P.</p> <p style="text-align: right;"><b>[Application &amp; Evaluate]</b></p>
60.	<p><i>[Algebra]</i></p> <p>Write the first five terms of the sequence given by <math>(\sqrt{3})^n</math>, <math>n \in \mathbb{N}</math>.</p> <p>(a) Is the sequence an A.P. or G.P?</p> <p>(b) If the sum of its first ten terms is <math>p(3+\sqrt{3})</math>, find the value of <math>p</math>.</p> <p style="text-align: right;"><b>[Application &amp; Evaluate]</b></p>

S.No.	Questions
<p>61.</p>	<p><i>[Algebra]</i></p> <p>ABC is a triangle as shown in the figure below.</p>  <p>(a) Write down the coordinates of A, B, and C on reflecting through the origin.            (b) Write down the coordinates of the point/s which remain invariant on reflecting the triangle ABC on the <math>x</math>-axis and <math>y</math>-axis respectively.</p> <p style="text-align: right;"><b>[Analysis &amp; Evaluate]</b></p>
<p>62.</p>	<p><i>[Algebra]</i></p> <p>Determine the ratio in which the line <math>y = 2 + 3x</math> divides the line segment AB joining the points A (-3, 9) and B (4, 2).</p> <p style="text-align: right;"><b>[Understanding &amp; Application]</b></p>
<p>63.</p>	<p><i>[Algebra]</i></p> <p>Square ABCD lies in the third quadrant of a XY plane such that its vertex A is at (-3,-1) and the diagonal DB produced is equally inclined to both the axes. The diagonals AC and BD meet at P (-2,-2). Find the:</p> <p>(a) slope of BD            (b) equation of AC</p> <p style="text-align: right;"><b>[Analysis, Create &amp; Evaluate]</b></p>
<p>64.</p>	<p><i>[Geometry]</i></p> <p>ABCD is a rectangle where side BC is twice side AB. If <math>\triangle ACQ \sim \triangle BAP</math>, find area of <math>\triangle BAP</math>: area of <math>\triangle ACQ</math></p>  <p style="text-align: right;"><b>[Analysis &amp; Evaluate]</b></p>

S.No.	Questions
65.	<p data-bbox="323 286 475 320"><i>[Geometry]</i></p> <div data-bbox="536 349 1056 674" style="text-align: center;"> </div> <p data-bbox="323 723 1388 792">Given a triangle ABC, and D is a point on BC such that <math>BD = 4\text{cm}</math> and <math>DC = x\text{ cm}</math>. If <math>\angle BAD = \angle C</math>, and <math>AB = 8\text{cm}</math>, then,</p> <p data-bbox="323 815 1388 884">(a) Prove that triangle ABD is similar to triangle CBA. (b) Find the value of 'x'. <span style="float: right;"><b>[Understanding, Application &amp; Evaluate]</b></span></p>
66.	<p data-bbox="323 922 475 956"><i>[Geometry]</i></p> <p data-bbox="323 978 1388 1048">In the extract of Survey of India map G43S7, prepared on a scale of 2cm to 1 km,a child finds the length of the cart track between two settlements is 7.6 cm. Find:</p> <p data-bbox="323 1070 1388 1140">(a) the actual length of the cart track on the ground. (b) actual area of a grid square,if each has an area of <math>4\text{ cm}^2</math>.</p> <p data-bbox="995 1162 1388 1196" style="text-align: right;"><b>[Understanding &amp; Evaluate]</b></p>
67.	<p data-bbox="323 1227 475 1261"><i>[Geometry]</i></p> <p data-bbox="323 1283 1388 1352">Construct a triangle ABC such that <math>AB = 7\text{cm}</math>, <math>BC = 6\text{cm}</math> and <math>CA = 5\text{cm}</math>. (use ruler and compass to do so).</p> <p data-bbox="323 1375 1388 1512">(a) Draw the locus of the points such that i) it is equidistant from BC and BA. ii) it is equidistant from points A and B. (b) Mark P where the loci i) and ii) meet , measure and write length of PA.</p> <p data-bbox="1117 1534 1388 1568" style="text-align: right;"><b>[Analysis &amp; Create]</b></p>

S.No.	Questions
<p>68.</p>	<p><i>[Geometry]</i></p> <p>In the given figure O is the centre of the circle. ABCD is a quadrilateral where sides AB, BC, CD and DA touch the circle at E, F, G and H respectively. If <math>AB = 15</math> cm, <math>BC = 18</math> cm and <math>AD = 24</math> cm, find the length of CD.</p>  <p style="text-align: right;"><b>[Application &amp; Evaluate]</b></p>
<p>69.</p>	<p><i>[Geometry]</i></p> <p>In the given diagram ABCDEF is a regular hexagon inscribed in a circle with centre O. PQ is a tangent to the circle at D. Find the value of:</p> <p>(a) <math>\angle FAG</math>          (b) <math>\angle BCD</math>          (c) <math>\angle PDE</math></p>  <p style="text-align: right;"><b>[Application &amp; Evaluate]</b></p>
<p>70.</p>	<p><i>[Geometry]</i></p>  <p>AB and CD intersect at the centre O of the circle given in the above diagram. If <math>\angle EBA = 33^\circ</math> and <math>\angle EAC = 82^\circ</math>, find</p> <p>(a) <math>\angle BAE</math>          (b) <math>\angle BOC</math>          (c) <math>\angle ODB</math></p> <p style="text-align: right;"><b>[Application &amp; Evaluate]</b></p>

S.No.	Questions
71.	<p><i>[Mensuration]</i></p> <p>A famous sweet shop “Madanlal Sweets” sells tinned rasgullas. The tin container is cylindrical in shape with diameter 14cm, height 16cm, and it can hold 20 spherical rasgullas of diameter 6cm and sweetened liquid such that the can is filled and then sealed. Find out how much sweetened liquid the can contains. Take <math>\pi=3.14</math>.</p> <p style="text-align: right;"><b>[Analysis, Application &amp; Evaluate]</b></p>
72.	<p><i>[Mensuration]</i></p> <p>The ratio of the radius and the height of a solid metallic right circular cylinder is 7 : 27. This is melted and made into a cone of diameter 14 cm and slant height 25 cm. Find the height of the:</p> <p>(a) cone (b) cylinder</p> <p style="text-align: right;"><b>[Analysis, Application &amp; Evaluate]</b></p>
73.	<p><i>[Trigonometry]</i></p> <p>An inclined plane AC is prepared with its base AB which is <math>\sqrt{3}</math> times its vertical height BC. The length of the inclined plane is 15 m. Find:</p> <p>(a) value of <math>\theta</math> (b) length of its base AB, in nearest metre.</p> <div style="display: flex; justify-content: space-around; align-items: center;">   </div> <p style="text-align: right;"><b>[Analysis, Application &amp; Evaluate]</b></p>
74.	<p><i>[Trigonometry]</i></p> <p>Prove that</p> $\tan^2\theta + \cos^2\theta - 1 = \tan^2\theta \cdot \sin^2\theta$ <p style="text-align: right;"><b>[Analysis &amp; Application]</b></p>

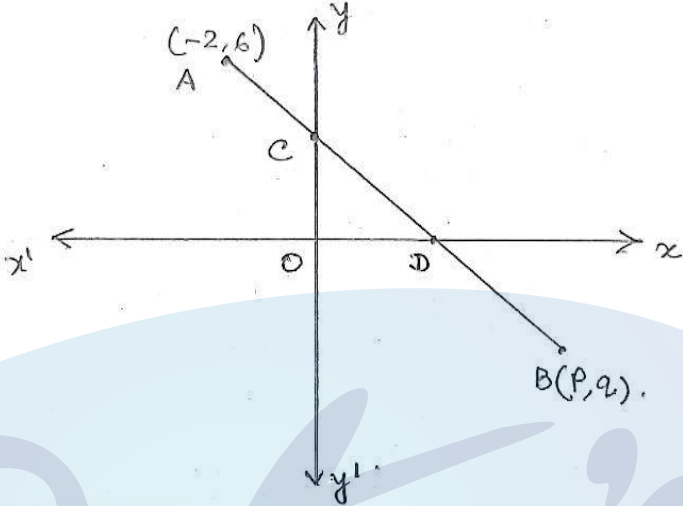
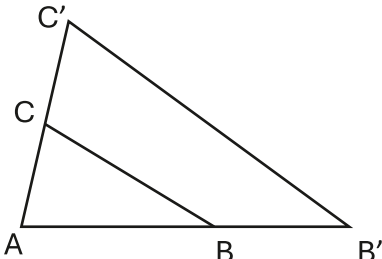
S.No.	Questions
<p>75.</p>	<p><i>[Statistics]</i></p> <p>The class mark and frequency of a data is given in the graph. From the graph, Find:</p> <p>(a) The table showing the class interval and frequency.            (b) Calculate the mean.</p>  <p style="text-align: right;"><b>[Analysis, Application &amp; Evaluate]</b></p>
<p>76.</p>	<p><i>[Statistics]</i></p> <p>The mean of 5, 7, 8, 4 and <math>m</math> is <math>n</math> and the mean of 5, 7, 8, 4, <math>m</math> and <math>n</math> is <math>m</math>. Find the values of <math>m</math> and <math>n</math>.</p> <p style="text-align: right;"><b>[Understanding &amp; Application]</b></p>
<p>77.</p>	<p><i>[Probability]</i></p> <p>The probability of selecting a blue marble and a red marble from a bag containing red, blue and green marbles is <math>\frac{1}{3}</math> and <math>\frac{1}{5}</math> respectively. If the bag contains 14 green marbles, then find:</p> <p>(a) number of red marbles.            (b) total number of marbles in the bag.</p> <p style="text-align: right;"><b>[Analysis &amp; Evaluate]</b></p>


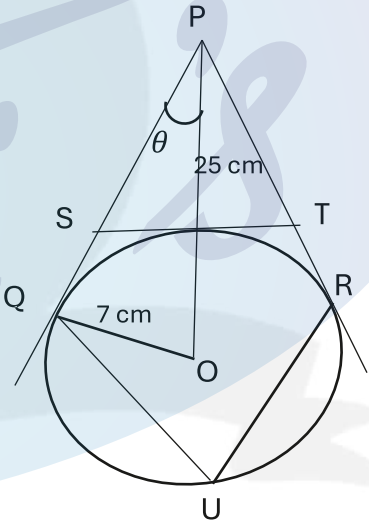
### III. Short Answer Type -2 (4 Marks)


S.No.	Questions																									
78.	<p><i>[Commercial Mathematics]</i></p> <p>The following bill shows the GST rate and the marked price of items:</p> <table border="1" style="margin-left: auto; margin-right: auto; border-collapse: collapse;"> <thead> <tr> <th colspan="5" style="text-align: center;">Grow Shree Groceries</th> </tr> <tr> <th style="width: 5%;">S. No.</th> <th style="width: 30%;">Item</th> <th style="width: 15%;">Marked Price (₹)</th> <th style="width: 10%;">Quantity</th> <th style="width: 40%;">Rate of GST</th> </tr> </thead> <tbody> <tr> <td style="text-align: center;">1.</td> <td>Wheat Flour (unpacked)</td> <td style="text-align: center;">35.00</td> <td style="text-align: center;">5 kg</td> <td style="text-align: center;"><math>x\%</math></td> </tr> <tr> <td style="text-align: center;">2.</td> <td>Basmati Rice (Branded &amp; Packed)</td> <td style="text-align: center;">180.00</td> <td style="text-align: center;">5 kg</td> <td style="text-align: center;">5%</td> </tr> <tr> <td style="text-align: center;">3.</td> <td>Surf Excel Quick WashDetergent</td> <td style="text-align: center;">220.00</td> <td style="text-align: center;"><math>y</math> kg</td> <td style="text-align: center;">18%</td> </tr> </tbody> </table> <p>Find:</p> <p>(a) the value of <math>x</math> if the total GST on wheat flour and basmati rice is ₹45.            (b) the value of <math>y</math>, if CGST paid for detergent powder is ₹39.60.            (c) total amount to be paid (including GST) for the above bill.</p> <p style="text-align: right;"><b>[Understanding, Analysis &amp; Evaluate]</b></p>	Grow Shree Groceries					S. No.	Item	Marked Price (₹)	Quantity	Rate of GST	1.	Wheat Flour (unpacked)	35.00	5 kg	$x\%$	2.	Basmati Rice (Branded & Packed)	180.00	5 kg	5%	3.	Surf Excel Quick WashDetergent	220.00	$y$ kg	18%
Grow Shree Groceries																										
S. No.	Item	Marked Price (₹)	Quantity	Rate of GST																						
1.	Wheat Flour (unpacked)	35.00	5 kg	$x\%$																						
2.	Basmati Rice (Branded & Packed)	180.00	5 kg	5%																						
3.	Surf Excel Quick WashDetergent	220.00	$y$ kg	18%																						
79.	<p><i>[Commercial Mathematics]</i></p> <p>Amit deposited ₹ 600 per month in a recurring deposit account. The bank pays a simple interest of 12% p.a. Calculate the:</p> <p>(a) number of monthly instalments Amit deposits to get a maturity amount of ₹11826?            (b) total interest paid by the bank.            (c) total amount deposited by him.</p> <p style="text-align: right;"><b>[Application &amp; Evaluate]</b></p>																									
80.	<p><i>[Commercial Mathematics]</i></p> <p>Aman has 500, ₹100 shares of a company quoted at ₹ 120, paying a 10% dividend. When the share price rises to ₹ 200 each, he sells all his shares. He invests half of the sale proceeds in ₹10, 12% shares at ₹25, and the remaining sale proceeds in ₹ 400, 9% shares at ₹ 500.</p> <p>Find his:</p> <p>(a) sales proceeds.            (b) investment in ₹10, 12% shares at ₹ 25.            (c) original income.            (d) change in income.</p> <p style="text-align: right;"><b>[Application &amp; Evaluate]</b></p>																									

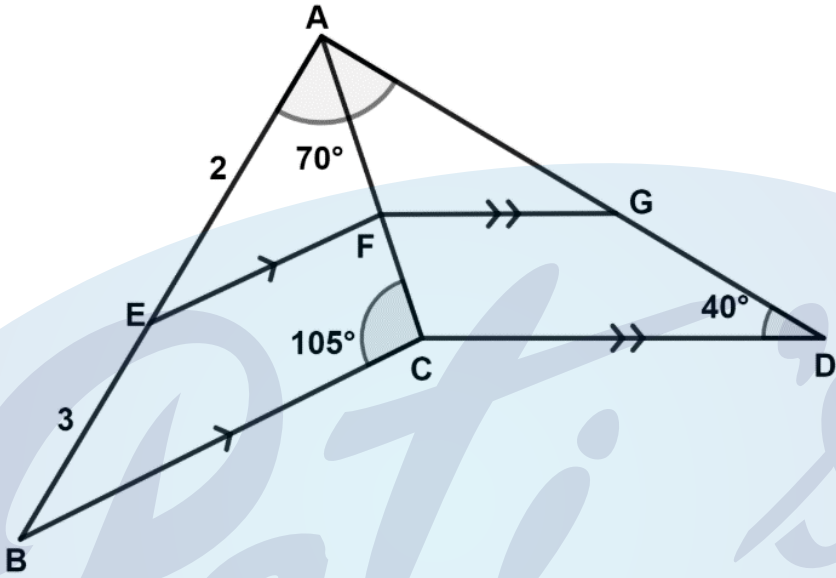
S.No.	Questions															
81.	<p><i>[Algebra]</i></p> <p>Solve the following inequation:</p> $\frac{11 + 3x}{5} \geq 3 - x > -\frac{3}{2}, x \in \mathbb{R}$ <p>(a) Write the solution set            (b) Represent the solution on the number line. <span style="float: right;"><b>[Application &amp; Create]</b></span></p>															
82.	<p><i>[Algebra]</i></p> <p>Determine whether the following quadratic equation has real roots.</p> $5x^2 - 9x + 4 = 0$ <p>(a) Give reasons for your answer.            (b) If the equation has real roots, identify them. <span style="float: right;"><b>[Analysis &amp; Application]</b></span></p>															
83.	<p><i>[Algebra]</i></p> <p>The profit in rupees in a local restaurant and the number of customers who visited the restaurant are tabulated below for each week for one month.</p> <table border="1" style="width: 100%; border-collapse: collapse; text-align: center;"> <thead> <tr> <th>Week number</th> <th>Week 1</th> <th>Week 2</th> <th>Week 3</th> <th>Week 4</th> </tr> </thead> <tbody> <tr> <td>Number of customers</td> <td>1400</td> <td>5600</td> <td>x</td> <td>3212</td> </tr> <tr> <td>Profit in ₹</td> <td>28000</td> <td>112000</td> <td>32140</td> <td>y</td> </tr> </tbody> </table> <p>Find:</p> <p>(a) if the number of customers and profit per week in continued proportion or not? Justify your answer.            (b) the value of <math>x</math> and <math>y</math>. <span style="float: right;"><b>[Analysis &amp; Evaluation]</b></span></p>	Week number	Week 1	Week 2	Week 3	Week 4	Number of customers	1400	5600	x	3212	Profit in ₹	28000	112000	32140	y
Week number	Week 1	Week 2	Week 3	Week 4												
Number of customers	1400	5600	x	3212												
Profit in ₹	28000	112000	32140	y												
84.	<p><i>[Algebra]</i></p> <p>Given, <math>9x^2 - 4</math> is a factor of <math>9x^3 - mx^2 - nx + 8</math>:</p> <p>(a) find the value of <math>m</math> and <math>n</math> using the remainder and factor theorem.            (b) factorise the given polynomial completely. <span style="float: right;"><b>[Understanding &amp; Application]</b></span></p>															

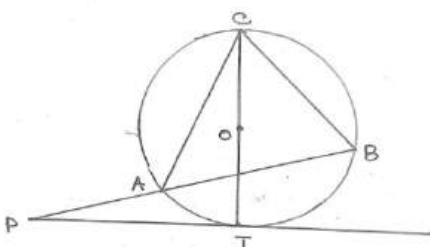
S.No.	Questions																						
85.	<p><i>[Probability]</i></p> <p>The marks scored by 100 students are given below:</p> <table border="1" style="margin-left: auto; margin-right: auto;"> <thead> <tr> <th>Marks scored</th> <th>No. of students</th> </tr> </thead> <tbody> <tr> <td>0-10</td> <td>4</td> </tr> <tr> <td>10- 20</td> <td>5</td> </tr> <tr> <td>20-30</td> <td>9</td> </tr> <tr> <td>30-40</td> <td>7</td> </tr> <tr> <td>40-50</td> <td>13</td> </tr> <tr> <td>50-60</td> <td>12</td> </tr> <tr> <td>60-70</td> <td>15</td> </tr> <tr> <td>70-80</td> <td>11</td> </tr> <tr> <td>80-90</td> <td>14</td> </tr> <tr> <td>90-100</td> <td>10</td> </tr> </tbody> </table> <p>A student in the class is selected at random. Find the probability that the student has scored:</p> <p>(a) less than 20.            (b) below 60 but 30 or more.            (c) more than or equal to 70.            (d) above 89.</p> <p style="text-align: right;"><b>[Analysis &amp; Evaluation]</b></p>	Marks scored	No. of students	0-10	4	10- 20	5	20-30	9	30-40	7	40-50	13	50-60	12	60-70	15	70-80	11	80-90	14	90-100	10
Marks scored	No. of students																						
0-10	4																						
10- 20	5																						
20-30	9																						
30-40	7																						
40-50	13																						
50-60	12																						
60-70	15																						
70-80	11																						
80-90	14																						
90-100	10																						
86.	<p><i>[Algebra]</i></p> <p>Given, matrix <math>A = \begin{bmatrix} x &amp; 1 \\ y &amp; 2 \end{bmatrix}</math> and <math>B = \begin{bmatrix} x &amp; \\ x - 2 &amp; \end{bmatrix}</math> such that <math>AB</math> is a null matrix. Find:</p> <p>(a) order of the null matrix.            (b) possible values of <math>x</math> and <math>y</math>.</p> <p style="text-align: right;"><b>[Understanding &amp; Application]</b></p>																						
87.	<p><i>[Algebra]</i></p> <p>The sum of a certain number of terms of the Arithmetic Progression (A.P.) 20, 17, 14, .... is 65. Find the:</p> <p>(a) number of terms.            (b) last term.</p> <p style="text-align: right;"><b>[Understanding &amp; Application]</b></p>																						
88.	<p><i>[Algebra]</i></p> <p>(a) Point P (2, -3) on reflection becomes P'(2,3). Name the line of reflection (say <math>L_1</math>).</p> <p>(b) Point P' is reflected to P'' along the line (<math>L_2</math>), which is perpendicular to the line <math>L_1</math> and passes through the point, which is invariant along both axes. Write the coordinates of P''.</p> <p>(c) Name and write the coordinates of the point of intersection of the lines <math>L_1</math> and <math>L_2</math>.</p> <p>(d) Point P is reflected to P''' on reflection through the point named in the answer of above part of this question. Write the coordinates of P'''. Comment on the location of the points P'' and P'''.</p> <p style="text-align: right;"><b>[Analysis &amp; Create]</b></p>																						

S.No.	Questions
<p>89.</p>	<p><i>[Algebra]</i></p> <p>In the given figure, If the line segment AB is intercepted by the <i>y</i>-axis and <i>x</i>-axis at C and D, respectively, such that AC: AD = 1: 4 and D is the midpoint of CB. Find the coordinates of D, C and B.</p> <div style="text-align: center;">  </div> <p style="text-align: right;"><i>[Understanding &amp; Application]</i></p>
<p>90.</p>	<p><i>[Algebra]</i></p> <p>Find the equation of the straight line perpendicular to the line <math>x+2y=4</math>, which cuts an intercept of 2 units from the positive <i>y</i>-axis. Hence, find the intersection point of the two lines.</p> <p style="text-align: right;"><i>[Analysis &amp; Application]</i></p>
<p>91.</p>	<p><i>[Geometry]</i></p> <p>While preparing a PowerPoint presentation, <math>\Delta ABC</math> is enlarged along the side BC to <math>\Delta AB'C'</math>, as shown in the diagram, such that <math>BC: B'C'</math> is 3:5. Find:</p> <ol style="list-style-type: none"> <li><math>AB:BB'</math></li> <li>length AB, if <math>BB' = 4</math> cm.</li> <li>Is <math>\Delta ABC \sim \Delta AB'C'</math>? Justify your answer.</li> <li>ar (<math>\Delta ABC</math>): ar (quad. <math>BB'C'C</math>).</li> </ol> <div style="text-align: center;">  </div> <p style="text-align: right;"><i>[Understanding &amp; Evaluate]</i></p>

S.No.	Questions
92.	<p data-bbox="323 286 475 320"><i>[Geometry]</i></p> <div data-bbox="667 344 927 551" style="text-align: center;">  </div> <p data-bbox="323 602 1391 674">The approximate volume of a human eye is <math>6.5 \text{ cm}^3</math>. The volume of a laboratory model (excluding base and stand) of the human eye is <math>1404 \text{ cm}^3</math>.</p> <p data-bbox="323 692 1286 725">(a) State whether the scale factor <math>k</math> is less than, equals to or greater than 1.</p> <p data-bbox="323 728 552 761">(b) Calculate the:</p> <ol data-bbox="371 763 1391 909" style="list-style-type: none"> <li>i. value of <math>k</math></li> <li>ii. diameter of the human eye if the radius of the model is 7.2 cm.</li> <li>iii. the external surface area of the human eye if the surface area of the model is <math>651.6 \text{ cm}^2</math>.</li> </ol> <p data-bbox="1086 875 1391 909" style="text-align: right;"><b>[Analysis &amp; Evaluate]</b></p>
93.	<p data-bbox="323 947 475 981"><i>[Geometry]</i></p> <p data-bbox="323 999 927 1104">In the adjoining diagram PQ, PR and ST are the tangents to the circle with centre O and radius 7 cm. Given <math>OP=25 \text{ cm}</math>.</p> <p data-bbox="323 1122 392 1155">Find:</p> <ol data-bbox="323 1173 699 1290" style="list-style-type: none"> <li>(a) length of ST</li> <li>(b) value of <math>\angle OPQ</math>, i.e. <math>\theta</math></li> <li>(c) <math>\angle QUR</math>, in nearest degree</li> </ol> <p data-bbox="323 1301 659 1335"><i>(use mathematical tables)</i></p> <div data-bbox="967 958 1337 1480" style="text-align: right;">  </div> <p data-bbox="1038 1514 1391 1547" style="text-align: right;"><b>[Application &amp; Evaluate]</b></p>
94.	<p data-bbox="323 1590 475 1624"><i>[Geometry]</i></p> <p data-bbox="323 1641 1391 1713">Use ruler and compass to answer this question. Construct a triangle ABC where <math>AB=5.5 \text{ cm}</math>, <math>BC= 4.5 \text{ cm}</math> and angle <math>ABC=135^\circ</math>.</p> <p data-bbox="323 1731 1391 1803">Construct the circumcircle to the triangle ABC. Measure and write down the length of AC.</p> <p data-bbox="1110 1765 1391 1798" style="text-align: right;"><b>[Create &amp; Evaluate]</b></p>

S.No.	Questions
95.	<p><i>[Mensuration]</i></p> <p>The curved surface area of a right circular cone is half of another right circular cone. If the ratio of their slant heights is 2:1 and that of their volumes is 3:1, find ratio of their:</p> <p>(a) radii (b) heights</p> <p style="text-align: right;"><b>[Understanding &amp; Application]</b></p>
96.	<p><i>[Trigonometry]</i></p> <p>A cylindrical drum is unloaded from a truck by rolling it down along a wooden plank. The length of the plank is 10 m and it is making an angle of <math>10^\circ</math> with the horizontal ground. Find the height from which the cylindrical drum was rolled down. Give your answer correct to 3 significant figures.</p> <div style="text-align: center;">  </div> <p style="text-align: right;"><b>[Analysis &amp; Evaluate]</b></p>
97.	<p><i>[Statistics]</i></p> <p>The data given below shows the marks of 12 students in a test, arranged in ascending order:</p> <p>2, 3, 3, 3, 4, <math>x</math>, <math>x+2</math>, 8, <math>p</math>, <math>q</math>, 8, 9</p> <p>If the given value of the median and mode is 6 and 8 respectively, then find the values of <math>x</math>, <math>p</math>, <math>q</math>.</p> <p style="text-align: right;"><b>[Understanding &amp; Evaluate]</b></p>
98.	<p><i>[Algebra]</i></p> <p>Solve the linear inequation, write down the solution set and represent it on the real number line:</p> <p><math>5(2 - 4x) &gt; 18 - 16x &gt; 22 - 20x, x \in \mathbb{R}</math></p> <p style="text-align: right;"><b>[Application &amp; Create]</b></p>
99.	<p><i>[Algebra]</i></p> <p>If a polynomial <math>x^3 + 2x^2 - ax + b</math> leaves a remainder -6 when divided by <math>x + 1</math> and the same polynomial has <math>x - 2</math> as a factor, then find the values of <math>a</math> and <math>b</math>.</p> <p style="text-align: right;"><b>[Application &amp; Evaluate]</b></p>

S.No.	Questions
<p>100.</p>	<p><i>[Algebra]</i></p> <p>If <math>A = \begin{bmatrix} -1 &amp; 3 \\ 2 &amp; 0 \end{bmatrix}</math>, <math>B = \begin{bmatrix} 1 &amp; -2 \\ 0 &amp; 3 \end{bmatrix}</math>, <math>C = [1 \quad -4]</math> and <math>D = \begin{bmatrix} 4 \\ 1 \end{bmatrix}</math>.</p> <p>(a) Is the product <math>AC</math> possible? Justify your answer.            (b) Find the matrix <math>X</math>, such that <math>X = AB + B^2 - DC</math></p> <p style="text-align: right;"><i>[Analysis &amp; Evaluate]</i></p>
<p>101.</p>	<p><i>[Geometry]</i></p>  <p>In the given figure(not drawn to scale), <math>BC</math> is parallel to <math>EF</math>, <math>CD</math> is parallel to <math>FG</math>, <math>AE : EB = 2:3</math>, <math>\angle BAD = 70^\circ</math>, <math>\angle ACB = 105^\circ</math>, <math>\angle ADC = 40^\circ</math> and <math>AC</math> is bisector of <math>\angle BAD</math>.</p> <p>(a) Prove <math>\triangle AEF \sim \triangle AGF</math>            (b) Find:            i. <math>AG : AD</math>            ii. area of <math>\triangle ACB</math> : area <math>\triangle ACD</math>            iii. area of quadrilateral <math>ABCD</math> : area of <math>\triangle ACB</math>.</p> <p style="text-align: right;"><i>[Analysis, Application &amp; Evaluate]</i></p>

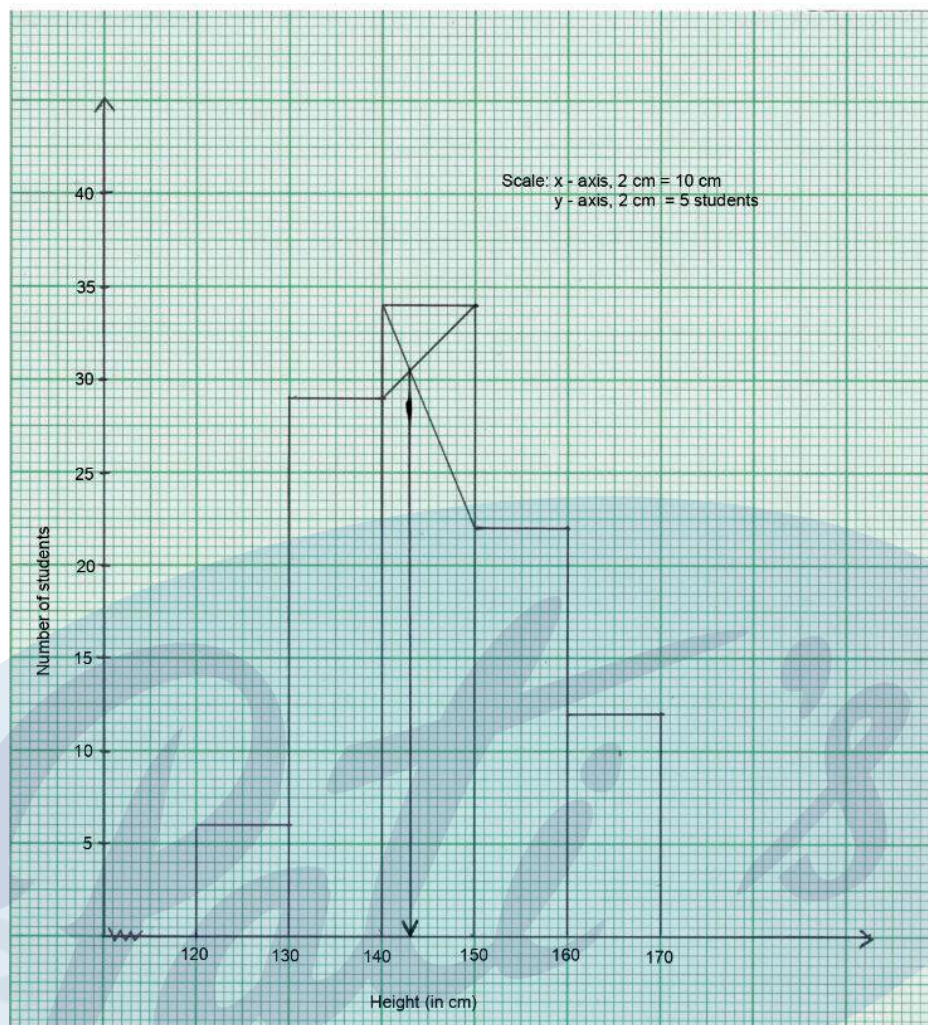
S.No.	Questions														
<p>102.</p>	<p><i>[Geometry]</i></p> <p>In the given figure angle <math>\angle ABC = 70^\circ</math> and angle <math>\angle ACB = 50^\circ</math>. Given O is the centre of the circle and PT is the tangent to the circle. Then calculate the following angles</p> <p>(a) <math>\angle CBT</math>            (b) <math>\angle BAT</math>            (c) <math>\angle PBT</math>            (d) <math>\angle APT</math></p> <div style="text-align: right;">  </div> <p style="text-align: right;"><b>[Application &amp; Evaluate]</b></p>														
<p>103.</p>	<p><i>[Geometry]</i></p> <p>(Use a ruler and a compass for this question.)</p> <p>(a) Construct a triangle ABC such that <math>BC = 8\text{cm}</math>, <math>AC = 10\text{cm}</math> and <math>\angle ABC = 90^\circ</math>.            (b) Construct an incircle to this triangle. Mark the centre as I.            (c) Measure and write the length of the in-radius.            (d) Measure and write the length of the tangents from vertex C to the incircle.            (e) Mark points P, Q and R where the incircle touches the sides AB, BC, and AC of the triangle respectively. Write the relationship between <math>\angle RIQ</math> and <math>\angle QCR</math>.</p> <p style="text-align: right;"><b>[Analysis &amp; Create]</b></p>														
<p>104.</p>	<p><i>[Statistics]</i></p> <p>The daily wages of workers in a construction unit were recorded as follows:</p> <table border="1" style="margin-left: auto; margin-right: auto;"> <tr> <td><b>Class Marks (Wages)</b></td> <td>425</td> <td>475</td> <td>525</td> <td>575</td> <td>625</td> <td>675</td> </tr> <tr> <td><b>No. of workers</b></td> <td>6</td> <td>12</td> <td>15</td> <td>17</td> <td>7</td> <td>13</td> </tr> </table> <p>Form a frequency distribution table with class intervals and find modal wage by plotting a histogram.</p> <p style="text-align: right;"><b>[Analysis &amp; Create]</b></p>	<b>Class Marks (Wages)</b>	425	475	525	575	625	675	<b>No. of workers</b>	6	12	15	17	7	13
<b>Class Marks (Wages)</b>	425	475	525	575	625	675									
<b>No. of workers</b>	6	12	15	17	7	13									
<p>105.</p>	<p><i>[Probability]</i></p> <p>A bag contains 13 red cards, 13 black cards and 13 green cards. Each set of cards are numbered 1 to 13. From these cards, a card is drawn at random. What is the probability that the card drawn is a:</p> <p>(a) green card?            (b) a card with an even number?            (c) a red or black card with a number which is a multiple of three?</p> <p style="text-align: right;"><b>[Understanding &amp; Evaluate]</b></p>														

### IV. Long Answer Type-1 (Graph-based) (5 Marks)

S.No.	Questions																		
106.	<p><i>[Algebra]</i></p> <p>(For this question, use a graph paper. Scale: 2cm = 1unit along both x and y-axis.)</p> <p>Plot the points A(2,2), and B (6, -2) in the graph and answer the following:</p> <ol style="list-style-type: none"> <li>Reflect points A in origin to point D and write the co-ordinates of point D.</li> <li>Reflect points A in line <math>y = -2</math> to point C and write the co-ordinates of points C.</li> <li>Find a point P on CD which is invariant under reflection in <math>x = 0</math>, write its co-ordinates.</li> <li>Write the geometrical name of the closed figure ABCD.</li> <li>Write the co-ordinates of the point of intersection of the diagonals of ABCD.</li> </ol> <p style="text-align: right;"><b>[Understanding &amp; Create]</b></p>																		
107.	<p><i>[Algebra]</i></p> <p>(For this question, use a graph paper. Scale: 1cm = 1unit along both x and y-axis.)</p> <p>Plot points A ( 0,3 ) , B ( 4,0 ) , C ( 6,2 ) and D ( 5,0 ). Reflect the points as given below and write their coordinates:</p> <ol style="list-style-type: none"> <li>Reflect A on x-axis to A'.</li> <li>Reflect B on y- axis to B'.</li> <li>Reflect C on x-axis to C'.</li> <li>D remain invariant when reflected on the line whose equation is _____.</li> <li>Join the points A, B, C, D,C',B,A' , B' and A to form a closed figure. Name the closed figure BCDC'.</li> </ol> <p style="text-align: right;"><b>[Understanding &amp; Create]</b></p>																		
108.	<p><i>[Statistics]</i></p> <p>The following data represents the daily wages in rupees of a certain number of employees of a company:</p> <table border="1" style="width: 100%; border-collapse: collapse; text-align: center;"> <thead> <tr> <th>Daily wages (in ₹)</th> <th>30 – 40</th> <th>40 -50</th> <th>50 – 60</th> <th>60 -70</th> <th>70-80</th> <th>80-90</th> <th>90-100</th> <th>100-110</th> </tr> </thead> <tbody> <tr> <td>No. of Employees</td> <td>8</td> <td>14</td> <td>12</td> <td>17</td> <td>20</td> <td>26</td> <td>13</td> <td>10</td> </tr> </tbody> </table> <p>Use a graph to answer the following questions:</p> <ol style="list-style-type: none"> <li>Represent the above distribution by an ogive.</li> <li>Find the following on the graph drawn:               <ol style="list-style-type: none"> <li>Median wage.</li> <li>Percentage of employees who earn more than ₹ 84 per day.</li> <li>Number of employees who earn ₹56 and below</li> </ol> </li> </ol> <p style="text-align: right;"><b>[Create &amp; Evaluate]</b></p>	Daily wages (in ₹)	30 – 40	40 -50	50 – 60	60 -70	70-80	80-90	90-100	100-110	No. of Employees	8	14	12	17	20	26	13	10
Daily wages (in ₹)	30 – 40	40 -50	50 – 60	60 -70	70-80	80-90	90-100	100-110											
No. of Employees	8	14	12	17	20	26	13	10											

109. [Statistics]


Study the graph and answer the questions that follow:

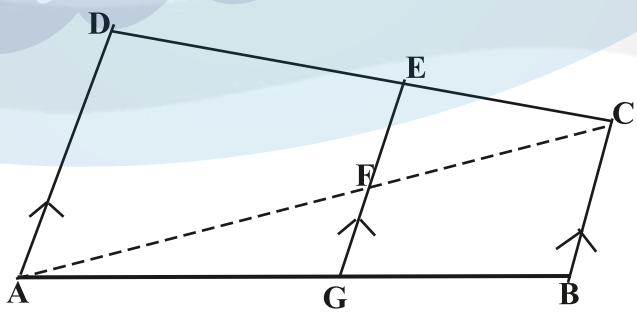


- Make a frequency table for the information provided in the graph.
- The number of students whose height is less than 150 cm.
- The total number of students.
- The modal height
- The difference in the modal height and the mean height, if the average height of the students is 145.5 cm

[Analysis & Application]

## V. Long Answer Type 2 (5 Marks)

S.No.	Questions																								
110.	<p><i>[Commercial Mathematics]</i></p> <div style="text-align: center; margin: 10px 0;">  </div> <p>On seeing the above display board outside Pearl Stationary Shop, Chetan enters the shop to buy the following items:</p> <table border="1" style="width: 100%; border-collapse: collapse; margin: 10px 0;"> <thead> <tr> <th></th> <th style="text-align: center;">Pen</th> <th style="text-align: center;">Pencil</th> <th style="text-align: center;">Rainbow Cover Notebook</th> </tr> </thead> <tbody> <tr> <td><b>Price</b></td> <td style="text-align: center;">₹5 each</td> <td style="text-align: center;">₹7 each</td> <td style="text-align: center;">₹200 each</td> </tr> <tr> <td><b>Discount</b></td> <td style="text-align: center;">5% on a dozen pens</td> <td style="text-align: center;">10% on 20 pencils</td> <td style="text-align: center;">--</td> </tr> <tr> <td><b>Premium</b></td> <td style="text-align: center;">-</td> <td style="text-align: center;">-</td> <td style="text-align: center;">₹50 on each notebook</td> </tr> <tr> <td><b>Items purchased</b></td> <td style="text-align: center;">1 dozen</td> <td style="text-align: center;">20 pencils</td> <td style="text-align: center;">5</td> </tr> <tr> <td><b>GST</b></td> <td style="text-align: center;">18%</td> <td style="text-align: center;">12%</td> <td style="text-align: center;">12%</td> </tr> </tbody> </table> <p>The shopkeeper handed over the bill to Chetan saying that he has given further discount of 2% on total bill. Chetan became so happy hearing about the discount that he did not check the bill until he reached home. He later found out that though shopkeeper has given 2% discount as promised, he had also charged uniform 18% GST on all the items.</p> <p>(a) Calculate :</p> <ol style="list-style-type: none"> <li>i. total selling price of all the items as per the offers displayed on the board.</li> <li>ii. total amount to be paid by Chetan including GST with correct rates.</li> <li>iii. actual amount charged by the shopkeeper.</li> </ol> <p>(b) Did the shopkeeper overcharge Chetan? Justify your answer.</p> <p style="text-align: right; color: purple;"><b>[Application &amp; Evaluate]</b></p>		Pen	Pencil	Rainbow Cover Notebook	<b>Price</b>	₹5 each	₹7 each	₹200 each	<b>Discount</b>	5% on a dozen pens	10% on 20 pencils	--	<b>Premium</b>	-	-	₹50 on each notebook	<b>Items purchased</b>	1 dozen	20 pencils	5	<b>GST</b>	18%	12%	12%
	Pen	Pencil	Rainbow Cover Notebook																						
<b>Price</b>	₹5 each	₹7 each	₹200 each																						
<b>Discount</b>	5% on a dozen pens	10% on 20 pencils	--																						
<b>Premium</b>	-	-	₹50 on each notebook																						
<b>Items purchased</b>	1 dozen	20 pencils	5																						
<b>GST</b>	18%	12%	12%																						

S.No.	Questions
111.	<p><i>[Algebra]</i></p> <p>Using remainder and factor theorem, show that <math>(2x+3)</math> is a factor of the polynomial <math>2x^2+11x+12</math>. Hence, factorise it completely. What must be multiplied to the given polynomial so that <math>x^2 + 3x - 4</math> is a factor of the resulting polynomial? Also, write the resulting polynomial. <span style="float: right;"><b>[Understanding, Application &amp; Evaluate]</b></span></p>
112.	<p><i>[Algebra]</i></p> <p>The sequence 2,9,16,.....is given.</p> <p>(a) Identify if the given sequence is an AP or a GP. Give reasons to support your answer.</p> <p>(b) Find the 20<sup>th</sup> term of the sequence.</p> <p>(c) Find the difference between the sum of its first 22 and 25 terms.</p> <p>(d) Is the term 102 belong to this sequence?</p> <p>(e) If 'k' is added to each of the above terms, will the new sequence be in A.P. or G.P.? <span style="float: right;"><b>[Analysis &amp; Evaluate]</b></span></p>
113.	<p><i>[Algebra]</i></p> <p>Given the equations of two straight lines, L1 and L2 are <math>x - y = 1</math> and <math>x + y = 5</math> respectively . If L1 and L2 intersects at point Q ( 3, 2).Find :</p> <p>(a) the equation of line L3 which is parallel to L1 and has y-intercept 3.</p> <p>(b) the value of k, if the line L3 meets the line L2 at a point P (k,4).</p> <p>(c) the coordinate of R and the ratio PQ: QR, if line L2 meets x-axis at point R. <span style="float: right;"><b>[Analysis &amp; Evaluate]</b></span></p>
114.	<p><i>[Geometry]</i></p> <div style="text-align: center;">  </div> <p>In the figure given above( not drawn to scale), <math>AD \parallel GE \parallel BC</math>, <math>DE = 18</math> cm, <math>EC = 3</math> cm, <math>AD = 35</math> cm. Find :</p> <p>(a) <math>AF:FC</math></p> <p>(b) length of <math>EF</math></p> <p>(c) <math>\text{area}(\text{trapezium ADEF}) : \text{area}(\triangle EFC)</math></p> <p>(d) <math>BC: GF</math> <span style="float: right;"><b>[Application &amp; Evaluate]</b></span></p>

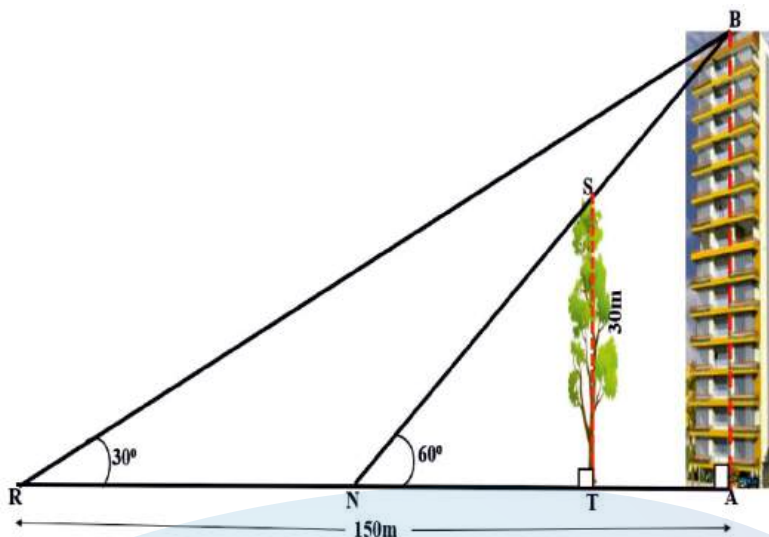
S.No.	Questions
115.	<p><i>[Geometry]</i></p> <p><i>(Use a ruler and a compass for this question.)</i></p> <p>(a) Construct the locus of a moving point which moves such that it keeps a fixed distance of 4.5 cm from a fixed-point O.</p> <p>(b) Draw line segment AB of 6 cm where A and B are two points on the locus (a).</p> <p>(c) Construct the locus of all points equidistant from A and B. Name the points of intersection of the loci (a) and (c) as P and Q respectively.</p> <p>(d) Join PA. Find the locus of all points equidistant from AP and AB.</p> <p>Mark the point of intersection of the locus (a) and (d) as R. Measure and write down the length of AR.</p> <p style="text-align: right;"><b>[Create &amp; Analysis]</b></p>
116.	<p><i>[Constructions]</i></p> <p><i>(Use a ruler and a compass for this question.)</i></p> <p>Construct a regular hexagon ABCDEF of side 4.3 cm and construct its circumscribed circle.</p> <p>Also, construct tangents to the circumscribed circle at points B and C which meets each other at point P. Measure and record <math>\angle BPC</math>.</p> <p style="text-align: right;"><b>[Create &amp; Analysis]</b></p>
117.	<p><i>[Mensuration]</i></p> <p>A mathematics teacher uses certain amount of terracotta clay to form different shaped solids. First, she turned it into a sphere of radius 7cm and then she made a right circular cone with base radius 14 cm. Find the height of the cone so formed. If the same clay is turned to make a right circular cylinder of height <math>7/3</math> cm then find the radius of the cylinder so formed. Also, compare the total surface areas of sphere and cylinder so formed .</p> <p style="text-align: right;"><b>[Understanding, Application &amp; Evaluate]</b></p>

S.No.

Questions

118.

[Trigonometry]



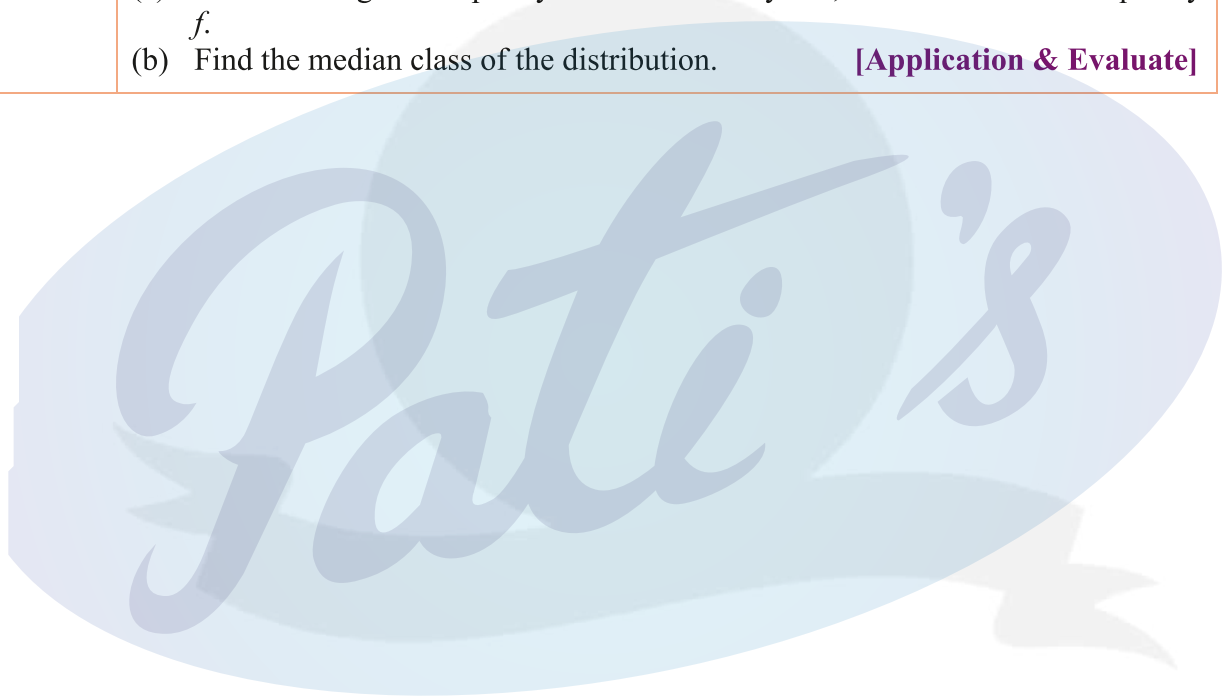
A tree (TS) of height 30 m stands in front of a tall building (AB). Two friends Rohit and Neha are standing at R and N respectively, along the same straight line joining the tree and the building (as shown in the diagram). Rohit, standing at a distance of 150 m from the foot of the building, observes the angle of elevation of the top of the building as  $30^\circ$ . Neha from her position observes that the top of the building and the tree has the same elevation of  $60^\circ$ .

Find the:

- (a) height of the building
- (b) distance between
  - i. Neha and the foot of the building
  - ii. Rohit and Neha
  - iii. Neha and the tree
  - iv. building and the tree.

[Analysis, Application & Evaluate]

S.No.	Questions																		
119.	<p><i>[Statistics]</i></p> <p>A life insurance agent found the following data of age distribution of 100 policy holders where <math>f</math> is an unknown frequency.</p> <table border="1"><thead><tr><th>Age in years</th><th>No. of Policy Holders</th></tr></thead><tbody><tr><td>15-20</td><td>7</td></tr><tr><td>20-25</td><td>12</td></tr><tr><td>25-30</td><td>15</td></tr><tr><td>30-35</td><td>22</td></tr><tr><td>35-40</td><td><math>f</math></td></tr><tr><td>40-45</td><td>14</td></tr><tr><td>45-50</td><td>8</td></tr><tr><td>50-55</td><td>4</td></tr></tbody></table> <p>(a) If the mean age of the policy holders is 35.65 years, find the unknown frequency <math>f</math>.</p> <p>(b) Find the median class of the distribution. <span style="float: right;"><b>[Application &amp; Evaluate]</b></span></p>	Age in years	No. of Policy Holders	15-20	7	20-25	12	25-30	15	30-35	22	35-40	$f$	40-45	14	45-50	8	50-55	4
Age in years	No. of Policy Holders																		
15-20	7																		
20-25	12																		
25-30	15																		
30-35	22																		
35-40	$f$																		
40-45	14																		
45-50	8																		
50-55	4																		

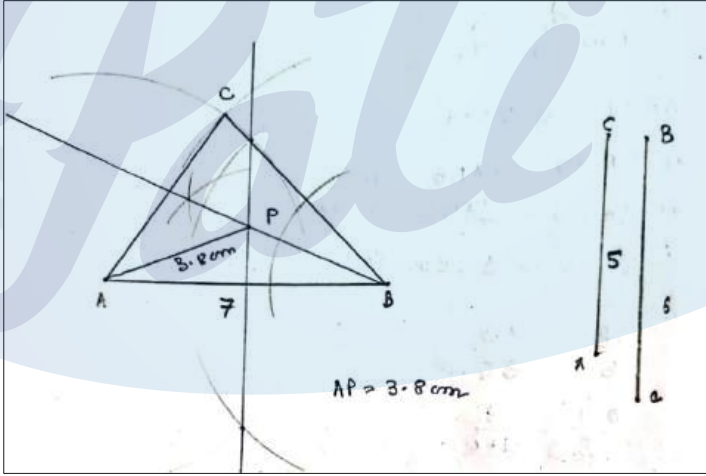


## Answer Key

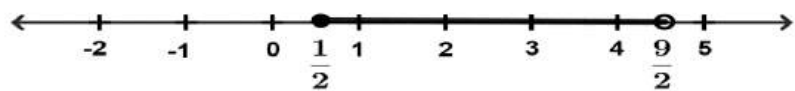
S.No	Expected Answer
1.	(c) ₹30
2.	(b) ₹ 28
3.	(d) simple interest for one month
4.	(b) ₹1250
5.	(d) Both Mr. Das and Mr. Singh have same rate of return of 20%.
6.	(b) ₹ 750
7.	(c) { 0,1,2}
8.	(c) $x < -2y$
9.	(d) 0 , 8
10.	(b) - 2
11.	(d) 230
12.	(c) 13 cm
13.	(d) $p : r = p^2 : q^2$
14.	(b) $60\pi$
15.	(d) 3
16.	(c) $(x+4)$
17.	(c) both matrices AB and BA are possible.
18.	(b) -6
19.	(b) 4
20.	(d) 2, 0, 4, 0, 8, 0
21.	(c) (6, -6)
22.	(b) $2y = x$


S.No	Expected Answer
23.	(c) 1, -1
24.	(a) $3x + 3y = 6$
25.	(d) 20 minutes
26.	(d) The similarity of given triangles cannot be determined.
27.	(c) $\angle PQR = \angle TSR$
28.	(d) 1.44m
29.	(c) $50^\circ$
30.	(a) $50^\circ, 100^\circ, 40^\circ$
31.	(d) $105^\circ$
32.	(c) Its volume
33.	(b) 42cm
34.	(b) $32\pi$
35.	(b) 3 : 2
36.	(c) $(\cot\theta + \tan\theta)^2$
37.	(d) 5
38.	(a) $30^\circ$
39.	(b) $\alpha < \beta$
40.	(c) A is true but R is false.
41.	(c) A is true but R is false.
42.	(a) Both A and R are True, and R is the correct explanation.
43.	(d) A and R both are true.
44.	(c) A is true but R is false.
45.	(a) 2:3
46.	(b) $2 \times 1$
47.	(d) Arithmetic ( $d=0$ )

S.No	Expected Answer
48.	(a) circle
49.	(b) Incentre
50.	11.11%
51.	4%
52.	₹70
53.	$-1 \leq x \leq 5$ (a) 5, -1 (b) No change in maximum value, minimum value will change to 0.
54.	$x = -\frac{2}{\sqrt{3}}, x = \frac{\sqrt{3}}{4}$
55.	$x = 20$ and GST rate = 20%
56.	3 and 12
57.	$(x+2)(x-1)(2x+1)$
58.	$\begin{bmatrix} 0 & 0 \\ 0 & 0 \end{bmatrix}$
59.	(a) $T_n = 21 + (n-1)21$ or $21n$ (b) Four are two-digit numbers. 21, 42, 63, 84 (c) 1155
60.	$\sqrt{3}, 3, 3\sqrt{3}, 9, 9\sqrt{3}$ (a) G.P. (b) $p=121$
61.	(a) $(-4, -5), (0, -3), (-3, 0)$ (b) For $x$ -axis C $(3,0)$ ; for $y$ -axis B $(0,3)$
62.	4:3
63.	(a) $m=1$ (b) $x+y+4=0$
64.	1:5

S.No	Expected Answer
65.	<p>(a) In <math>\triangle ABD</math> and <math>\triangle CBA</math>,  <math>\angle B</math> is common to both triangles,  <math>\angle BAD = \angle BCA</math> (given)  <math>\therefore \triangle ABD \sim \triangle CBA</math> (by A.A.A. postulate)</p> <p>(b) Since the triangles are similar, their corresponding sides are proportional.</p> $\therefore \frac{AC}{AD} = \frac{AB}{DB} = \frac{BC}{BA}$ $\therefore \frac{AC}{AD} = \frac{8}{4} = \frac{4+x}{8}$ $\therefore 2 \times 8 = 4 + x$ $\therefore 16 = 4 + x$ $\therefore x = 16 - 4$ $\therefore x = 12 \text{ cm}$
66.	<p>(a) 3.8 km            (b) <math>1 \text{ km}^2</math></p>
67.	
68.	27 cm
69.	<p>(a) <math>60^\circ</math>            (b) <math>120^\circ</math>            (c) <math>30^\circ</math></p>

S.No	Expected Answer														
70.	(a) $57^\circ$ (b) $50^\circ$ (c) $17^\circ$														
71.	$200.96 \text{ cm}^3$														
72.	24 cm, 18 cm														
73.	(a) $30^\circ$ (b) 13 m														
74.	$L.H.S. = \tan^2\theta + \cos^2\theta - 1$ $= \tan^2\theta - (1 - \cos^2\theta)$ $= \frac{\sin^2\theta}{\cos^2\theta} - \sin^2\theta$ $= \frac{\sin^2\theta(1 - \cos^2\theta)}{\cos^2\theta}$ $= \frac{\sin^2\theta}{\cos^2\theta} \times \sin^2\theta$ $= \tan^2\theta \cdot \sin^2\theta = R.H.S$														
75.	(a) <table border="1" data-bbox="319 1120 633 1424"> <thead> <tr> <th>Class interval</th> <th>frequency</th> </tr> </thead> <tbody> <tr> <td>12-14</td> <td>8</td> </tr> <tr> <td>14-16</td> <td>2</td> </tr> <tr> <td>16-18</td> <td>3</td> </tr> <tr> <td>18-20</td> <td>4</td> </tr> <tr> <td>20-22</td> <td>5</td> </tr> <tr> <td>22-24</td> <td>6</td> </tr> </tbody> </table> (b) Mean = 18	Class interval	frequency	12-14	8	14-16	2	16-18	3	18-20	4	20-22	5	22-24	6
Class interval	frequency														
12-14	8														
14-16	2														
16-18	3														
18-20	4														
20-22	5														
22-24	6														
76.	$m= 6; n= 6$														
77.	(a) 6 (b) 30														
78.	(a) 0% (b) $y = 2 \text{ kg}$ (c) ₹1639.20														
79.	(a) 18 instalments (b) ₹1026 (c) ₹10800														


S.No	Expected Answer
80.	(a) ₹1,00,000 (b) ₹ 50,000 (c) ₹5000 (d) ₹1000 (gain)
81.	(a) $\left\{x: \frac{1}{2} \leq x < \frac{9}{2}, x \in \mathbb{R}\right\}$  (b)
82.	(a) Since, $D > 0$ (b) 1 and $4/5$
83.	(a) No, they are in direct proportion. (b) $x = 1607, y = 64,240$
84.	(a) $m = 18, n = 4$ (b) $(3x - 2)(3x + 2)(x - 2)$
85.	(a) $9/100$ (b) $32/100 = 8/25$ (c) $35/100 = 7/20$ (d) $10/100 = 1/10$
86.	(a) Order of the null matrix is $2 \times 1$ . (b) $x = 1, y = 2$ and $x = -2, y = -4$
87.	(a) 10 (b) -7
88.	(a) $x$ -axis (b) $P''(-2, 3)$ (c) Origin $(0,0)$ (d) $P'''(-2,3)$ ; $P''$ & $P'''$ are coincident points.
89.	D $(6,0)$ , C $(0,9/2)$ B $(12, -9/2)$

S.No	Expected Answer
90.	$2x - y + 2 = 0$ (0, 2)
91.	(a) $AB:BB' = 3:2$ (b) $AB = 6 \text{ cm}$ (c) Yes, $\because BC \parallel B'C'$ (d) 9:16
92.	(a) $k > 1$ (b) i. $k = 6$ ii. 2.4 cm iii. $18.1 \text{ cm}^2$
93.	(a) 10.5 cm (b) $\theta = 16^\circ 16'$ (c) $73^\circ 44' = 74^\circ$
94.	$AC = 9.1 \text{ cm}$ (approx.) Radius = 6.5 cm
95.	(a) 1:4 (b) 48:1
96.	1.74 m
97.	$x = 5$ and $p = 8, q = 8$
98.	$\{x : x < -2 \text{ or } x > 1, x \in \mathbb{R}\}$ 
99.	$a = 3, b = -10$
100.	No, number of columns in A is not equal to number of rows in C. b) $\begin{bmatrix} -4 & 19 \\ 1 & 9 \end{bmatrix}$
101.	b) i. 2:5 ii. 1:1 iii. 2:1

S.No	Expected Answer														
102.	(a) $90^\circ$ (b) $30^\circ$ (c) $20^\circ$ (d) $10^\circ$														
103.	(c) 2cm (d) 5.8cm (e) $\angle RIQ + \angle QCR = 180^\circ$														
104.	Frequency table <table border="1" style="margin-left: 20px;"> <thead> <tr> <th>Wages in ₹</th> <th><math>f</math></th> </tr> </thead> <tbody> <tr> <td>400-450</td> <td>6</td> </tr> <tr> <td>450-500</td> <td>12</td> </tr> <tr> <td>500-550</td> <td>15</td> </tr> <tr> <td>550-600</td> <td>17</td> </tr> <tr> <td>600-650</td> <td>7</td> </tr> <tr> <td>650-700</td> <td>13</td> </tr> </tbody> </table> <p>Mode = ₹557.50</p>	Wages in ₹	$f$	400-450	6	450-500	12	500-550	15	550-600	17	600-650	7	650-700	13
Wages in ₹	$f$														
400-450	6														
450-500	12														
500-550	15														
550-600	17														
600-650	7														
650-700	13														
105.	$1/3, 6/13, 8/39$														
106.	(a) D (-2, -2) (b) C (2, -6) (c) P (0, -4) (d) square (e) (2, -2)														
107.	(a) (0, -3) (b) (-4, 0) (c) (6, -2) (d) $y = 0$ (e) Concave quadrilateral														
108.	(b) i) ₹74 ii) 32.5% iii) 30														

S.No	Expected Answer																		
109.	(a) <table border="1" style="margin-left: 20px;"> <thead> <tr> <th>Class</th> <th><math>f</math></th> <th><math>cf</math></th> </tr> </thead> <tbody> <tr> <td>120-130</td> <td>6</td> <td>6</td> </tr> <tr> <td>130-140</td> <td>29</td> <td>35</td> </tr> <tr> <td>140-150</td> <td>34</td> <td>69</td> </tr> <tr> <td>150-160</td> <td>22</td> <td>91</td> </tr> <tr> <td>160-170</td> <td>12</td> <td>103</td> </tr> </tbody> </table> (b) 69 (c) 103 (d) 143 cm (e) 2.5 cm	Class	$f$	$cf$	120-130	6	6	130-140	29	35	140-150	34	69	150-160	22	91	160-170	12	103
Class	$f$	$cf$																	
120-130	6	6																	
130-140	29	35																	
140-150	34	69																	
150-160	22	91																	
160-170	12	103																	
110.	a) i) ₹1433 ii) ₹1608.38 iii) ₹1657.12 b) Yes, the shopkeeper overcharged an amount of ₹48.78																		
111.	$(x + 4)(2x + 3)$ to multiplied by $(x - 1)$ $2x^3 + 9x^2 + x - 12$																		
112.	(a) AP as $d = 7$ (b) 135 (c) 489 (d) No (e) A.P.																		
113.	(a) $x - y + 3 = 0$ (b) $k = 1$ (c) R (5,0); 1:1																		
114.	(a) 6:1 (b) 5 cm (c) 48:1 (d) 7:6																		
115.	AR $\approx$ 4.8cm																		
116.	$\angle BPC = 120^\circ$																		

S.No	Expected Answer
117.	$h_{\text{cone}}=7 \text{ cm}$ $r_{\text{cylinder}}=14 \text{ cm}$ $\frac{\text{TSA sphere}}{\text{TSA cylinder}} = \frac{3}{7}$
118.	(a) 86.6 m (b) i. 50 m ii. 100 m iii. 17.32 m iv. 32.68 m.
119.	(a) 18 (b) 30-35






Prepare for ICSE CLASS 10  
Free Resources

SCAN QR CODE Now




History/Civics




Geography




Maths



Physics



Chemistry



Biology



Hindi



Physical  
Education




Computer  
Applications





Prepare for ICSE CLASS 10  
Free Resources


SCAN QR CODE Now




Economics




Commercial  
Studies



French




Robotics & AI




Home Science



EVS



Marathi



Gujarati



Odiya



# Scan QR code for Free Access to 500+ Prelim Papers across 20 subjects

